

SOCIETY OF ACTUARIES

**EXAM C CONSTRUCTION AND EVALUATION OF ACTUARIAL MODELS**

**EXAM C SAMPLE QUESTIONS**

The sample questions and solutions have been modified over time. This page indicates changes made since January 1, 2014.

June 2016

Question 266 was moved to become Question 306 and Question 307 (effective with the October 2016 syllabus) added.

May 2015:

Questions 189 and 244 have been modified to not refer to the Anderson-Darling test

January 14, 2014:

Questions and solutions 300–305 have been added.

Some of the questions in this study note are taken from past examinations. The weight of topics in these sample questions is not representative of the weight of topics on the exam. The syllabus indicates the exam weights by topic.

Copyright 2016 by the Society of Actuaries

**1.** You are given:

(i) Losses follow a loglogistic distribution with cumulative distribution function:

$$F(x) = \frac{(x/\theta)^\gamma}{1+(x/\theta)^\gamma}$$

(ii) The sample of losses is:

10    35    80    86    90    120    158    180    200    210    1500

Calculate the estimate of  $\theta$  by percentile matching, using the 40th and 80th empirically smoothed percentile estimates.

- (A) Less than 77
- (B) At least 77, but less than 87
- (C) At least 87, but less than 97
- (D) At least 97, but less than 107
- (E) At least 107

**2.** You are given:

- (i) The number of claims has a Poisson distribution.
- (ii) Claim sizes have a Pareto distribution with parameters  $\theta = 0.5$  and  $\alpha = 6$
- (iii) The number of claims and claim sizes are independent.
- (iv) The observed pure premium should be within 2% of the expected pure premium 90% of the time.

Calculate the expected number of claims needed for full credibility.

- (A) Less than 7,000
- (B) At least 7,000, but less than 10,000
- (C) At least 10,000, but less than 13,000
- (D) At least 13,000, but less than 16,000
- (E) At least 16,000

3. You study five lives to estimate the time from the onset of a disease to death. The times to death are:

2      3      3      3      7

Using a triangular kernel with bandwidth 2, calculate the density function estimate at 2.5.

- (A) 8/40
- (B) 12/40
- (C) 14/40
- (D) 16/40
- (E) 17/40

4. You are given:

- (i) Losses follow a single-parameter Pareto distribution with density function:

$$f(x) = \frac{\alpha}{x^{\alpha+1}}, \quad x > 1, \quad 0 < \alpha < \infty$$

- (ii) A random sample of size five produced three losses with values 3, 6 and 14, and two losses exceeding 25.

Calculate the maximum likelihood estimate of  $\alpha$ .

- (A) 0.25
- (B) 0.30
- (C) 0.34
- (D) 0.38
- (E) 0.42

- 5.** You are given:
- (i) The annual number of claims for a policyholder has a binomial distribution with probability function:

$$p(x|q) = \binom{2}{x} q^x (1-q)^{2-x}, \quad x = 0, 1, 2$$

- (ii) The prior distribution is:

$$\pi(q) = 4q^3, \quad 0 < q < 1$$

This policyholder had one claim in each of Years 1 and 2.

Calculate the Bayesian estimate of the number of claims in Year 3.

- (A) Less than 1.1  
(B) At least 1.1, but less than 1.3  
(C) At least 1.3, but less than 1.5  
(D) At least 1.5, but less than 1.7  
(E) At least 1.7

- 6.** For a sample of dental claims  $x_1, x_2, \dots, x_{10}$ , you are given:

- (i)  $\sum x_i = 3860$  and  $\sum x_i^2 = 4,574,802$   
(ii) Claims are assumed to follow a lognormal distribution with parameters  $\mu$  and  $\sigma$   
(iii)  $\mu$  and  $\sigma$  are estimated using the method of moments.

Calculate  $E[X \wedge 500]$  for the fitted distribution.

- (A) Less than 125  
(B) At least 125, but less than 175  
(C) At least 175, but less than 225  
(D) At least 225, but less than 275  
(E) At least 275

**7.** DELETED

**8.** You are given:

- (i) Claim counts follow a Poisson distribution with mean  $\theta$ .
- (ii) Claim sizes follow an exponential distribution with mean  $10\theta$ .
- (iii) Claim counts and claim sizes are independent, given  $\theta$ .
- (iv) The prior distribution has probability density function:

$$\pi(\theta) = \frac{5}{\theta^6}, \quad \theta > 1$$

Calculate Bühlmann's  $k$  for aggregate losses.

- (A) Less than 1
- (B) At least 1, but less than 2
- (C) At least 2, but less than 3
- (D) At least 3, but less than 4
- (E) At least 4

**9.** DELETED

**10.** DELETED

**11.** You are given:

- (i) Losses on a company's insurance policies follow a Pareto distribution with probability density function:

$$f(x|\theta) = \frac{\theta}{(x+\theta)^2}, \quad 0 < x < \infty$$

- (ii) For half of the company's policies  $\theta = 1$ , while for the other half  $\theta = 3$ .

For a randomly selected policy, losses in Year 1 were 5.

Calculate the posterior probability that losses for this policy in Year 2 will exceed 8.

- (A) 0.11  
(B) 0.15  
(C) 0.19  
(D) 0.21  
(E) 0.27

**12.** You are given total claims for two policyholders:

Policyholder	Year			
	1	2	3	4
X	730	800	650	700
Y	655	650	625	750

Using the nonparametric empirical Bayes method, calculate the Bühlmann credibility premium for Policyholder Y.

- (A) 655  
(B) 670  
(C) 687  
(D) 703  
(E) 719

- 13.** A particular line of business has three types of claim. The historical probability and the number of claims for each type in the current year are:

Type	Historical Probability	Number of Claims in Current Year
X	0.2744	112
Y	0.3512	180
Z	0.3744	138

You test the null hypothesis that the probability of each type of claim in the current year is the same as the historical probability.

Calculate the chi-square goodness-of-fit test statistic.

- (A) Less than 9
  - (B) At least 9, but less than 10
  - (C) At least 10, but less than 11
  - (D) At least 11, but less than 12
  - (E) At least 12
- 14.** The information associated with the maximum likelihood estimator of a parameter  $\theta$  is  $4n$ , where  $n$  is the number of observations.

Calculate the asymptotic variance of the maximum likelihood estimator of  $2\theta$ .

- (A)  $1/(2n)$
- (B)  $1/n$
- (C)  $4/n$
- (D)  $8n$
- (E)  $16n$

**15.** You are given:

- (i) The probability that an insured will have at least one loss during any year is  $p$ .
- (ii) The prior distribution for  $p$  is uniform on  $[0, 0.5]$ .
- (iii) An insured is observed for 8 years and has at least one loss every year.

Calculate the posterior probability that the insured will have at least one loss during Year 9.

- (A) 0.450
- (B) 0.475
- (C) 0.500
- (D) 0.550
- (E) 0.625

**16-17.** Use the following information for questions 16 and 17.

For a survival study with censored and truncated data, you are given:

Time ( $t$ )	Number at Risk at Time $t$	Failures at Time $t$
1	30	5
2	27	9
3	32	6
4	25	5
5	20	4

**16.** The probability of failing at or before Time 4, given survival past Time 1, is  ${}_3q_1$ . Calculate Greenwood's approximation of the variance of  ${}_3\hat{q}_1$ .

- (A) 0.0067
- (B) 0.0073
- (C) 0.0080
- (D) 0.0091
- (E) 0.0105



**17.** Calculate the 95% log-transformed confidence interval for  $H(3)$ , based on the Nelson-Aalen estimate of this value of the cumulative hazard function.

- (A) (0.30, 0.89)
- (B) (0.31, 1.54)
- (C) (0.39, 0.99)
- (D) (0.44, 1.07)
- (E) (0.56, 0.79)

**18.** You are given:

(i) Two risks have the following severity distributions:

Amount of Claim	Probability of Claim Amount for Risk 1	Probability of Claim Amount for Risk 2
250	0.5	0.7
2,500	0.3	0.2
60,000	0.2	0.1

(ii) Risk 1 is twice as likely to be observed as Risk 2.

A claim of 250 is observed.

Calculate the Bühlmann credibility estimate of the second claim amount from the same risk.

- (A) Less than 10,200
- (B) At least 10,200, but less than 10,400
- (C) At least 10,400, but less than 10,600
- (D) At least 10,600, but less than 10,800
- (E) At least 10,800

**19.** You are given:

(i) A sample  $x_1, x_2, \dots, x_{10}$  is drawn from a distribution with probability density function:

$$f(x) = \frac{1}{2} \left[ \frac{1}{\theta} e^{-x/\theta} + \frac{1}{\sigma} e^{-x/\sigma} \right], \quad x > 0$$

(ii)  $\theta > \sigma$

(iii)  $\sum x_i = 150$  and  $\sum x_i^2 = 5000$

Estimate  $\theta$  by matching the first two sample moments to the corresponding population quantities.

- (A) 9
- (B) 10
- (C) 15
- (D) 20
- (E) 21

**20.** You are given a sample of two values, 5 and 9.

You estimate  $\text{Var}(X)$  using the estimator  $g(X_1, X_2) = \frac{1}{2} \sum (X_i - \bar{X})^2$ .

Calculate the bootstrap approximation of the mean square error of  $g$ .

- (A) 1
- (B) 2
- (C) 4
- (D) 8
- (E) 16

**21.** You are given:

- (i) The number of claims incurred in a month by any insured has a Poisson distribution with mean  $\lambda$ .
- (ii) The claim frequencies of different insureds are independent.
- (iii) The prior distribution is gamma with probability density function:

$$f(\lambda) = \frac{(100\lambda)^6 e^{-100\lambda}}{120\lambda}$$

(iv)

Month	Number of Insureds	Number of Claims
1	100	6
2	150	8
3	200	11
4	300	?

Calculate the Bühlmann-Straub credibility estimate of the number of claims in Month 4.

- (A) 16.7
- (B) 16.9
- (C) 17.3
- (D) 17.6
- (E) 18.0

**22.** You fit a Pareto distribution to a sample of 200 claim amounts and use the likelihood ratio test to test the hypothesis that  $\alpha = 1.5$  and  $\theta = 7.8$ .

You are given:

- (i) The maximum likelihood estimates are  $\hat{\alpha} = 1.4$  and  $\hat{\theta} = 7.6$ .
- (ii) The natural logarithm of the likelihood function evaluated at the maximum likelihood estimates is  $-817.92$ .
- (iii)  $\sum \ln(x_i + 7.8) = 607.64$

Determine the result of the test.

- (A) Reject at the 0.005 significance level.
- (B) Reject at the 0.010 significance level, but not at the 0.005 level.
- (C) Reject at the 0.025 significance level, but not at the 0.010 level.
- (D) Reject at the 0.050 significance level, but not at the 0.025 level.
- (E) Do not reject at the 0.050 significance level.

**23.** For a sample of 15 losses, you are given:

(i)

Interval	Observed Number of Losses
$(0, 2]$	5
$(2, 5]$	5
$(5, \infty)$	5

(ii) Losses follow the uniform distribution on  $(0, \theta)$ .

Estimate  $\theta$  by minimizing the function  $\sum_{j=1}^3 \frac{(E_j - O_j)^2}{O_j}$ , where  $E_j$  is the expected number of losses in the  $j$ th interval and  $O_j$  is the observed number of losses in the  $j$ th interval.

- (A) 6.0
- (B) 6.4
- (C) 6.8
- (D) 7.2
- (E) 7.6

**24.** You are given:

(i) The probability that an insured will have exactly one claim is  $\theta$ .

(ii) The prior distribution of  $\theta$  has probability density function:

$$\pi(\theta) = \frac{3}{2}\sqrt{\theta}, \quad 0 < \theta < 1$$

A randomly chosen insured is observed to have exactly one claim.

Calculate the posterior probability that  $\theta$  is greater than 0.60.

(A) 0.54

(B) 0.58

(C) 0.63

(D) 0.67

(E) 0.72

**25.** The distribution of accidents for 84 randomly selected policies is as follows:

Number of Accidents	Number of Policies
0	32
1	26
2	12
3	7
4	4
5	2
6	1
Total	84

Which of the following models best represents these data?

- (A) Negative binomial
- (B) Discrete uniform
- (C) Poisson
- (D) Binomial
- (E) Either Poisson or Binomial

**26.** You are given:

- (i) Low-hazard risks have an exponential claim size distribution with mean  $\theta$ .
- (ii) Medium-hazard risks have an exponential claim size distribution with mean  $2\theta$ .
- (iii) High-hazard risks have an exponential claim size distribution with mean  $3\theta$ .
- (iv) No claims from low-hazard risks are observed.
- (v) Three claims from medium-hazard risks are observed, of sizes 1, 2 and 3.
- (vi) One claim from a high-hazard risk is observed, of size 15.

Calculate the maximum likelihood estimate of  $\theta$ .

- (A) 1
- (B) 2
- (C) 3
- (D) 4
- (E) 5



**27.** You are given:

- (i)  $X_{\text{partial}}$  = pure premium calculated from partially credible data
- (ii)  $\mu = E[X_{\text{partial}}]$
- (iii) Fluctuations are limited to  $\pm k\mu$  of the mean with probability  $P$
- (iv)  $Z$  = credibility factor

Determine which of the following is equal to  $P$ .

- (A)  $\Pr[\mu - k\mu \leq X_{\text{partial}} \leq \mu + k\mu]$
- (B)  $\Pr[Z\mu - k \leq ZX_{\text{partial}} \leq Z\mu + k]$
- (C)  $\Pr[Z\mu - \mu \leq ZX_{\text{partial}} \leq Z\mu + \mu]$
- (D)  $\Pr[1 - k \leq ZX_{\text{partial}} + (1 - Z)\mu \leq 1 + k]$
- (E)  $\Pr[\mu - k\mu \leq ZX_{\text{partial}} + (1 - Z)\mu \leq \mu + k\mu]$

**28.** You are given:

Claim Size ( $X$ )	Number of Claims
(0, 25]	25
(25, 50]	28
(50, 100]	15
(100, 200]	6

Assume a uniform distribution of claim sizes within each interval.

Estimate  $E(X^2) - E[(X \wedge 150)^2]$ .

- (A) Less than 200
- (B) At least 200, but less than 300
- (C) At least 300, but less than 400
- (D) At least 400, but less than 500
- (E) At least 500

**29.** You are given:

(i) Each risk has at most one claim each year.

(ii)

Type of Risk	Prior Probability	Annual Claim Probability
I	0.7	0.1
II	0.2	0.2
III	0.1	0.4

One randomly chosen risk has three claims during Years 1-6.

Calculate the posterior probability of a claim for this risk in Year 7.

(A) 0.22

(B) 0.28

(C) 0.33

(D) 0.40

(E) 0.46

- 30.** You are given the following about 100 insurance policies in a study of time to policy surrender:
- (i) The study was designed in such a way that for every policy that was surrendered, a new policy was added, meaning that the risk set,  $r_j$ , is always equal to 100.
  - (ii) Policies are surrendered only at the end of a policy year.
  - (iii) The number of policies surrendered at the end of each policy year was observed to be:
    - 1 at the end of the 1st policy year
    - 2 at the end of the 2nd policy year
    - 3 at the end of the 3rd policy year
  
    - $n$  at the end of the  $n$ th policy year
  - (iv) The Nelson-Aalen empirical estimate of the cumulative distribution function at time  $n$ ,  $\hat{F}(n)$ , is 0.542.

Calculate the value of  $n$ .

- (A) 8
- (B) 9
- (C) 10
- (D) 11
- (E) 12

- 31.** You are given the following claim data for automobile policies:  
200 255 295 320 360 420 440 490 500 520 1020

Calculate the smoothed empirical estimate of the 45th percentile.

- (A) 358
- (B) 371
- (C) 384
- (D) 390
- (E) 396

- 32.** You are given:
- (i) The number of claims made by an individual insured in a year has a Poisson distribution with mean  $\lambda$ .
  - (ii) The prior distribution for  $\lambda$  is gamma with parameters  $\alpha = 1$  and  $\theta = 1.2$ .

Three claims are observed in Year 1, and no claims are observed in Year 2.

Using Bühlmann credibility, estimate the number of claims in Year 3.

- (A) 1.35
- (B) 1.36
- (C) 1.40
- (D) 1.41
- (E) 1.43

- 33.** In a study of claim payment times, you are given:

- (i) The data were not truncated or censored.
- (ii) At most one claim was paid at any one time.
- (iii) The Nelson-Aalen estimate of the cumulative hazard function,  $H(t)$ , immediately following the second paid claim, was  $23/132$ .

Calculate the Nelson-Aalen estimate of the cumulative hazard function,  $H(t)$ , immediately following the fourth paid claim.

- (A) 0.35
- (B) 0.37
- (C) 0.39
- (D) 0.41
- (E) 0.43

- 34.** The number of claims follows a negative binomial distribution with parameters  $\beta$  and  $r$ , where  $\beta$  is unknown and  $r$  is known. You wish to estimate  $\beta$  based on  $n$  observations, where  $\bar{x}$  is the mean of these observations.

Determine the maximum likelihood estimate of  $\beta$ .

- (A)  $\bar{x} / r^2$
- (B)  $\bar{x} / r$
- (C)  $\bar{x}$
- (D)  $r\bar{x}$
- (E)  $r^2\bar{x}$

- 35.** You are given the following information about a credibility model:

First Observation	Unconditional Probability	Bayesian Estimate of Second Observation
1	1/3	1.50
2	1/3	1.50
3	1/3	3.00

Calculate the Bühlmann credibility estimate of the second observation, given that the first observation is 1.

- (A) 0.75
- (B) 1.00
- (C) 1.25
- (D) 1.50
- (E) 1.75

**36.** For a survival study, you are given:

- (i) The product-limit estimator  $\hat{S}(t_0)$  is used to construct confidence intervals for  $S(t_0)$ .
- (ii) The 95% log-transformed confidence interval for  $S(t_0)$  is (0.695, 0.843).

Calculate  $\hat{S}(t_0)$ .

- (A) 0.758
- (B) 0.762
- (C) 0.765
- (D) 0.769
- (E) 0.779

**37.** A random sample of three claims from a dental insurance plan is given below:

225 525 950

Claims are assumed to follow a Pareto distribution with parameters  $\theta = 150$  and  $\alpha$ .

Calculate the maximum likelihood estimate of  $\alpha$ .

- (A) Less than 0.6
- (B) At least 0.6, but less than 0.7
- (C) At least 0.7, but less than 0.8
- (D) At least 0.8, but less than 0.9
- (E) At least 0.9

- 38.** An insurer has data on losses for four policyholders for 7 years. The loss from the  $i$ th policyholder for year  $j$  is  $X_{ij}$ .

You are given:

$$\sum_{i=1}^4 \sum_{j=1}^7 (X_{ij} - \bar{X}_i)^2 = 33.60, \quad \sum_{i=1}^4 (\bar{X}_i - \bar{X})^2 = 3.30$$

Using nonparametric empirical Bayes estimation, calculate the Bühlmann credibility factor for an individual policyholder.

- (A) Less than 0.74
- (B) At least 0.74, but less than 0.77
- (C) At least 0.77, but less than 0.80
- (D) At least 0.80, but less than 0.83
- (E) At least 0.83



**39.** You are given the following information about a commercial auto liability book of business:

- (i) Each insured's claim count has a Poisson distribution with mean  $\lambda$ , where  $\lambda$  has a gamma distribution with  $\alpha = 1.5$  and  $\theta = 0.2$ .
- (ii) Individual claim size amounts are independent and exponentially distributed with mean 5000.
- (iii) The full credibility standard is for aggregate losses to be within 5% of the expected with probability 0.90.

Using limited fluctuated credibility, calculate the expected number of claims required for full credibility.

- (A) 2165
- (B) 2381
- (C) 3514
- (D) 7216
- (E) 7938

**40.** You are given:

- (i) A sample of claim payments is: 29 64 90 135 182
- (ii) Claim sizes are assumed to follow an exponential distribution.
- (iii) The mean of the exponential distribution is estimated using the method of moments.

Calculate the value of the Kolmogorov-Smirnov test statistic.

- (A) 0.14
- (B) 0.16
- (C) 0.19
- (D) 0.25
- (E) 0.27

**41.** You are given:

- (i) Annual claim frequency for an individual policyholder has mean  $\lambda$  and variance  $\sigma^2$ .
- (ii) The prior distribution for  $\lambda$  is uniform on the interval  $[0.5, 1.5]$ .
- (iii) The prior distribution for  $\sigma^2$  is exponential with mean 1.25.

A policyholder is selected at random and observed to have no claims in Year 1.

Using Bühlmann credibility, estimate the number of claims in Year 2 for the selected policyholder.

- (A) 0.56
- (B) 0.65
- (C) 0.71
- (D) 0.83
- (E) 0.94

**42.** DELETED

**43.** You are given:

- (i) The prior distribution of the parameter  $\Theta$  has probability density function:

$$\pi(\theta) = \frac{1}{\theta^2}, \quad 1 < \theta < \infty$$

- (ii) Given  $\Theta = \theta$ , claim sizes follow a Pareto distribution with parameters  $\alpha = 2$  and  $\theta$ .

A claim of 3 is observed.

Calculate the posterior probability that  $\Theta$  exceeds 2.

- (A) 0.33  
(B) 0.42  
(C) 0.50  
(D) 0.58  
(E) 0.64

**44.** You are given:

- (i) Losses follow an exponential distribution with mean  $\theta$ .  
(ii) A random sample of 20 losses is distributed as follows:

Loss Range	Frequency
[0, 1000]	7
(1000, 2000]	6
(2000, $\infty$ )	7

Calculate the maximum likelihood estimate of  $\theta$ .

- (A) Less than 1950  
(B) At least 1950, but less than 2100  
(C) At least 2100, but less than 2250  
(D) At least 2250, but less than 2400  
(E) At least 2400

**45.** You are given:

(i) The amount of a claim,  $X$ , is uniformly distributed on the interval  $[0, \theta]$ .

(ii) The prior density of  $\theta$  is  $\pi(\theta) = \frac{500}{\theta^2}$ ,  $\theta > 500$ .

Two claims,  $x_1 = 400$  and  $x_2 = 600$ , are observed. You calculate the posterior distribution as:

$$f(\theta | x_1, x_2) = 3 \left( \frac{600^3}{\theta^4} \right), \quad \theta > 600$$

Calculate the Bayesian premium,  $E(X_3 | x_1, x_2)$ .

- (A) 450
- (B) 500
- (C) 550
- (D) 600
- (E) 650

**46.** The claim payments on a sample of ten policies are:

2 3 3 5 5+ 6 7 7+ 9 10+

+ indicates that the loss exceeded the policy limit

Using the Kaplan-Meier product-limit estimator, calculate the probability that the loss on a policy exceeds 8.

- (A) 0.20
- (B) 0.25
- (C) 0.30
- (D) 0.36
- (E) 0.40

47. You are given the following observed claim frequency data collected over a period of 365 days:

<u>Number of Claims per Day</u>	<u>Observed Number of Days</u>
0	50
1	122
2	101
3	92
4+	0

Fit a Poisson distribution to the above data, using the method of maximum likelihood.

Regroup the data, by number of claims per day, into four groups:

0      1      2      3+

Apply the chi-square goodness-of-fit test to evaluate the null hypothesis that the claims follow a Poisson distribution.

Determine the result of the chi-square test.

- (A) Reject at the 0.005 significance level.
- (B) Reject at the 0.010 significance level, but not at the 0.005 level.
- (C) Reject at the 0.025 significance level, but not at the 0.010 level.
- (D) Reject at the 0.050 significance level, but not at the 0.025 level.
- (E) Do not reject at the 0.050 significance level.

**48.** You are given the following joint distribution:

$X$	$\Theta$	
	0	1
0	0.4	0.1
1	0.1	0.2
2	0.1	0.1

For a given value of  $\Theta$  and a sample of size 10 for  $X$ :

$$\sum_{i=1}^{10} x_i = 10$$

Calculate the Bühlmann credibility premium.

- (A) 0.75
- (B) 0.79
- (C) 0.82
- (D) 0.86
- (E) 0.89

**49.** You are given:

$x$	0	1	2	3
$\Pr[X=x]$	0.5	0.3	0.1	0.1

The method of moments is used to estimate the population mean,  $\mu$ , and variance,  $\sigma^2$ ,  
By  $\bar{X}$  and  $S_n^2 = \frac{\sum (X_i - \bar{X})^2}{n}$ , respectively.

Calculate the bias of  $S_n^2$ , when  $n = 4$ .

- (A) -0.72
- (B) -0.49
- (C) -0.24
- (D) -0.08
- (E) 0.00

- 50.** You are given four classes of insureds, each of whom may have zero or one claim, with the following probabilities:

Class	Number of Claims	
	0	1
I	0.9	0.1
II	0.8	0.2
III	0.5	0.5
IV	0.1	0.9

A class is selected at random (with probability 0.25), and four insureds are selected at random from the class. The total number of claims is two.

If five insureds are selected at random from the same class, estimate the total number of claims using Bühlmann-Straub credibility.

- (A) 2.0
- (B) 2.2
- (C) 2.4
- (D) 2.6
- (E) 2.8

**51.** DELETED

- 52.** With the bootstrapping technique, the underlying distribution function is estimated by which of the following?

- (A) The empirical distribution function
- (B) A normal distribution function
- (C) A parametric distribution function selected by the modeler
- (D) Any of (A), (B) or (C)
- (E) None of (A), (B) or (C)



**53.** You are given:

Number of Claims	Probability	Claim Size	Probability
0	1/5		
1	3/5	25	1/3
		150	2/3
2	1/5	50	2/3
		200	1/3

Claim sizes are independent.

Calculate the variance of the aggregate loss.

- (A) 4,050
- (B) 8,100
- (C) 10,500
- (D) 12,510
- (E) 15,612

**54.** You are given:

- (i) Losses follow an exponential distribution with mean  $\theta$ .
- (ii) A random sample of losses is distributed as follows:

Loss Range	Number of Losses
(0 – 100]	32
(100 – 200]	21
(200 – 400]	27
(400 – 750]	16
(750 – 1000]	2
(1000 – 1500]	2
Total	100

Estimate  $\theta$  by matching at the 80th percentile.

- (A) 249
- (B) 253
- (C) 257
- (D) 260
- (E) 263

**55.** You are given:

Class	Number of Insureds	Claim Count Probabilities				
		0	1	2	3	4
1	3000	1/3	1/3	1/3	0	0
2	2000	0		2/3	1/6	0
3	1000	0	0	1/6	2/3	1/6

A randomly selected insured has one claim in Year 1.

Calculate the Bayesian expected number of claims in Year 2 for that insured.

- (A) 1.00
- (B) 1.25
- (C) 1.33
- (D) 1.67
- (E) 1.75

**56.** You are given the following information about a group of policies:

Claim Payment	Policy Limit
5	50
15	50
60	100
100	100
500	500
500	1000

Determine the likelihood function.

- (A)  $f(50)f(50)f(100)f(100)f(500)f(1000)$
- (B)  $f(50)f(50)f(100)f(100)f(500)f(1000) / [1 - F(1000)]$
- (C)  $f(5)f(15)f(60)f(100)f(500)f(500)$
- (D)  $f(5)f(15)f(60)f(100)f(500)f(1000) / [1 - F(1000)]$
- (E)  $f(5)f(15)f(60)[1 - F(100)][1 - F(500)]f(500)$

**57.** DELETED

**58.** You are given:

- (i) The number of claims per auto insured follows a Poisson distribution with mean  $\lambda$ .
- (ii) The prior distribution for  $\lambda$  has the following probability density function:

$$f(\lambda) = \frac{(500\lambda)^{50} e^{-500\lambda}}{\lambda\Gamma(50)}$$

- (iii) A company observes the following claims experience:

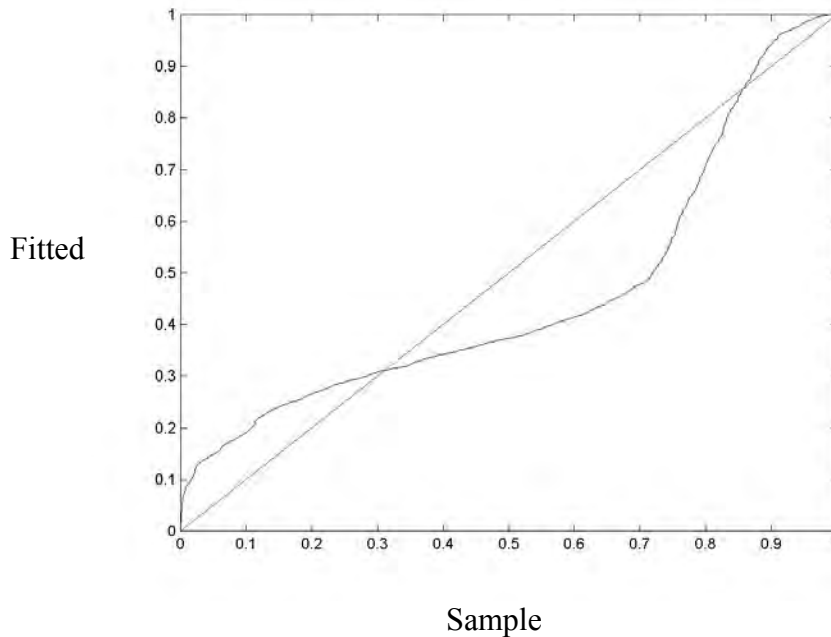
	Year 1	Year 2
Number of claims	75	210
Number of autos insured	600	900

The company expects to insure 1100 autos in Year 3.

Calculate the Bayesian expected number of claims in Year 3.

- (A) 178
- (B) 184
- (C) 193
- (D) 209
- (E) 224

59. The graph below shows a  $p$ - $p$  plot of a fitted distribution compared to a sample.



Which of the following is true?

- (A) The tails of the fitted distribution are too thick on the left and on the right, and the fitted distribution has less probability around the median than the sample.
- (B) The tails of the fitted distribution are too thick on the left and on the right, and the fitted distribution has more probability around the median than the sample.
- (C) The tails of the fitted distribution are too thin on the left and on the right, and the fitted distribution has less probability around the median than the sample.
- (D) The tails of the fitted distribution are too thin on the left and on the right, and the fitted distribution has more probability around the median than the sample.
- (E) The tail of the fitted distribution is too thick on the left, too thin on the right, and the fitted distribution has less probability around the median than the sample.

- 60.** You are given the following information about six coins:

Coin	Probability of Heads
1 – 4	0.50
5	0.25
6	0.75

A coin is selected at random and then flipped repeatedly.  $X_i$  denotes the outcome of the  $i$ th flip, where “1” indicates heads and “0” indicates tails. The following sequence is obtained:

$$S = \{X_1, X_2, X_3, X_4\} = \{1, 1, 0, 1\}$$

Calculate  $E(X_5 | S)$  using Bayesian analysis.

- (A) 0.52  
(B) 0.54  
(C) 0.56  
(D) 0.59  
(E) 0.63
- 61.** You observe the following five ground-up claims from a data set that is truncated from below at 100:

125    150    165    175    250

You fit a ground-up exponential distribution using maximum likelihood estimation.

Calculate the mean of the fitted distribution.

- (A) 73  
(B) 100  
(C) 125  
(D) 156  
(E) 173

- 62.** An insurer writes a large book of home warranty policies. You are given the following information regarding claims filed by insureds against these policies:
- (i) A maximum of one claim may be filed per year.
  - (ii) The probability of a claim varies by insured, and the claims experience for each insured is independent of every other insured.
  - (iii) The probability of a claim for each insured remains constant over time.
  - (iv) The overall probability of a claim being filed by a randomly selected insured in a year is 0.10.
  - (v) The variance of the individual insured claim probabilities is 0.01.

An insured selected at random is found to have filed 0 claims over the past 10 years.

Calculate the Bühlmann credibility estimate for the expected number of claims the selected insured will file over the next 5 years.

- (A) 0.04
- (B) 0.08
- (C) 0.17
- (D) 0.22
- (E) 0.25

**63.** DELETED



**64.** For a group of insureds, you are given:

- (i) The amount of a claim is uniformly distributed but will not exceed a certain unknown limit  $\theta$ .
- (ii) The prior distribution of  $\theta$  is  $\pi(\theta) = \frac{500}{\theta^2}$ ,  $\theta > 500$ .
- (iii) Two independent claims of 400 and 600 are observed.

Calculate the probability that the next claim will exceed 550.

- (A) 0.19
- (B) 0.22
- (C) 0.25
- (D) 0.28
- (E) 0.31

**65.** You are given the following information about a general liability book of business comprised of 2500 insureds:

- (i)  $X_i = \sum_{j=1}^{N_i} Y_{ij}$  is a random variable representing the annual loss of the  $i$ th insured.
- (ii)  $N_1, N_2, \dots, N_{2500}$  are independent and identically distributed random variables following a negative binomial distribution with parameters  $r = 2$  and  $\beta = 0.2$ .
- (iii)  $Y_{i1}, Y_{i2}, \dots, Y_{iN_i}$  are independent and identically distributed random variables following a Pareto distribution with  $\alpha = 3.0$  and  $\theta = 1000$ .
- (iv) The full credibility standard is to be within 5% of the expected aggregate losses 90% of the time.

Using limited fluctuation credibility theory, calculate the partial credibility of the annual loss experience for this book of business.

- (A) 0.34
- (B) 0.42
- (C) 0.47
- (D) 0.50
- (E) 0.53

- 66.** To estimate  $E[X]$ , you have simulated  $X_1, X_2, X_3, X_4, X_5$  with the following results:
- |   |   |   |   |   |
|---|---|---|---|---|
| 1 | 2 | 3 | 4 | 5 |
|---|---|---|---|---|
- You want the standard deviation of the estimator of  $E[X]$  to be less than 0.05.

Estimate the total number of simulations needed.

- (A) Less than 150
- (B) At least 150, but less than 400
- (C) At least 400, but less than 650
- (D) At least 650, but less than 900
- (E) At least 900
- 67.** You are given the following information about a book of business comprised of 100 insureds:
- (i)  $X_i = \sum_{j=1}^{N_i} Y_{ij}$  is a random variable representing the annual loss of the  $i$ th insured.
- (ii)  $N_1, N_2, \dots, N_{100}$  are independent random variables distributed according to a negative binomial distribution with parameters  $r$  (unknown) and  $\beta = 0.2$ .
- (iii) The unknown parameter  $r$  has an exponential distribution with mean 2.
- (iv)  $Y_{i1}, Y_{i2}, \dots, Y_{iN_i}$  are independent random variables distributed according to a Pareto distribution with  $\alpha = 3.0$  and  $\theta = 1000$ .

Calculate the Bühlmann credibility factor,  $Z$ , for the book of business.

- (A) 0.000
- (B) 0.045
- (C) 0.500
- (D) 0.826
- (E) 0.905

**68.** For a mortality study of insurance applicants in two countries, you are given:

(i)

	Country A		Country B	
$t_i$	$s_j$	$r_j$	$s_j$	$r_j$
1	20	200	15	100
2	54	180	20	85
3	14	126	20	65
4	22	112	10	45

(ii)  $r_j$  is the number at risk over the period  $(t_{i-1}, t_i)$ . Deaths,  $s_j$ , during the period  $(t_{i-1}, t_i)$  are assumed to occur at  $t_i$ .

(iii)  $S^T(t)$  is the Kaplan-Meier product-limit estimate of  $S(t)$  based on the data for all study participants.

(iv)  $S^B(t)$  is the Kaplan-Meier product-limit estimate of  $S(t)$  based on the data for study participants in Country B.

Calculate  $|S^T(4) - S^B(4)|$ .

(A) 0.06

(B) 0.07

(C) 0.08

(D) 0.09

(E) 0.10

- 69.** You fit an exponential distribution to the following data:
- 1000      1400      5300      7400      7600

Calculate the coefficient of variation of the maximum likelihood estimate of the mean,  $\theta$ .

- (A) 0.33  
 (B) 0.45  
 (C) 0.70  
 (D) 1.00  
 (E) 1.21
- 70.** You are given the following information on claim frequency of automobile accidents for individual drivers:

	Business Use		Pleasure Use	
	Expected Claims	Claim Variance	Expected Claims	Claim Variance
Rural	1.0	0.5	1.5	0.8
Urban	2.0	1.0	2.5	1.0
Total	1.8	1.06	2.3	1.12

You are also given:

- (i) Each driver's claims experience is independent of every other driver's.  
 (ii) There are an equal number of business and pleasure use drivers.

Calculate the Bühlmann credibility factor for a single driver.

- (A) 0.05  
 (B) 0.09  
 (C) 0.17  
 (D) 0.19  
 (E) 0.27

- 71.** You are investigating insurance fraud that manifests itself through claimants who file claims with respect to auto accidents with which they were not involved. Your evidence consists of a distribution of the observed number of claimants per accident and a standard distribution for accidents on which fraud is known to be absent. The two distributions are summarized below:

Number of Claimants per Accident	Standard Probability	Observed Number of Accidents
1	0.25	235
2	0.35	335
3	0.24	250
4	0.11	111
5	0.04	47
6+	0.01	22
Total	1.00	1000

Determine the result of a chi-square test of the null hypothesis that there is no fraud in the observed accidents.

- (A) Reject at the 0.005 significance level.
- (B) Reject at the 0.010 significance level, but not at the 0.005 level.
- (C) Reject at the 0.025 significance level, but not at the 0.010 level.
- (D) Reject at the 0.050 significance level, but not at the 0.025 level.
- (E) Do not reject at the 0.050 significance level.

**72.** You are given the following data on large business policyholders:

- (i) Losses for each employee of a given policyholder are independent and have a common mean and variance.
- (ii) The overall average loss per employee for all policyholders is 20.
- (iii) The variance of the hypothetical means is 40.
- (iv) The expected value of the process variance is 8000.
- (v) The following experience is observed for a randomly selected policyholder:

Year	Average Loss per Employee	Number of Employees
1	15	800
2	10	600
3	5	400

Calculate the Bühlmann-Straub credibility premium per employee for this policyholder.

- (A) Less than 10.5
- (B) At least 10.5, but less than 11.5
- (C) At least 11.5, but less than 12.5
- (D) At least 12.5, but less than 13.5
- (E) At least 13.5

**73.** You are given the following information about a group of 10 claims:

Claim Size Interval	Number of Claims in Interval	Number of Claims Censored in Interval
(0-15,000]	1	2
(15,000-30,000]	1	2
(30,000-45,000]	4	0

Assume that claim sizes and censorship points are uniformly distributed within each interval.

Estimate, using large data set methodology and exact exposures, the probability that a claim exceeds 30,000.

- (A) 0.67
- (B) 0.70
- (C) 0.74
- (D) 0.77
- (E) 0.80



**74.** You are given the following information about a group of 10 claims:

Claim Size Interval	Number of Claims in Interval	Number of Claims Censored in Interval
(0-15,000]	1	2
(15,000-30,000]	1	2
(30,000-45,000]	4	0

Assume that claim sizes and censorship points are uniformly distributed within each interval.

Estimate, using large data set methodology and actuarial exposures, the probability that a claim exceeds 30,000.

- (A) 0.67
- (B) 0.70
- (C) 0.74
- (D) 0.77
- (E) 0.80

**74.** ORIGINAL 74 DELETED

**75.** You are given:

- (i) Claim amounts follow a shifted exponential distribution with probability density function:

$$f(x) = \frac{1}{\theta} e^{-(x-\delta)/\theta}, \quad \delta < x < \infty$$

- (ii) A random sample of claim amounts  $X_1, X_2, \dots, X_{10}$ :

5 5 5 6 8 9 11 12 16 23

- (iii)  $\sum X_i = 100$  and  $\sum X_i^2 = 1306$

Estimate  $\delta$  using the method of moments.

- (A) 3.0  
(B) 3.5  
(C) 4.0  
(D) 4.5  
(E) 5.0

**76.** You are given:

- (i) The annual number of claims for each policyholder follows a Poisson distribution with mean  $\theta$ .
- (ii) The distribution of  $\theta$  across all policyholders has probability density function:

$$f(\theta) = \theta e^{-\theta}, \quad \theta > 0$$

(iii)  $\int_0^{\infty} \theta e^{-n\theta} d\theta = \frac{1}{n^2}$

A randomly selected policyholder is known to have had at least one claim last year.

Calculate the posterior probability that this same policyholder will have at least one claim this year.

- (A) 0.70
- (B) 0.75
- (C) 0.78
- (D) 0.81
- (E) 0.86

**77.** A survival study gave (1.63, 2.55) as the 95% linear confidence interval for the cumulative hazard function  $H(t_0)$ .

Calculate the 95% log-transformed confidence interval for  $H(t_0)$ .

- (A) (0.49, 0.94)
- (B) (0.84, 3.34)
- (C) (1.58, 2.60)
- (D) (1.68, 2.50)
- (E) (1.68, 2.60)

**78.** You are given:

- (i) Claim size,  $X$ , has mean  $\mu$  and variance 500.
- (ii) The random variable  $\mu$  has a mean of 1000 and variance of 50.
- (iii) The following three claims were observed: 750, 1075, 2000

Calculate the expected size of the next claim using Bühlmann credibility.

- (A) 1025
- (B) 1063
- (C) 1115
- (D) 1181
- (E) 1266

**79.** Losses come from a mixture of an exponential distribution with mean 100 with probability  $p$  and an exponential distribution with mean 10,000 with probability  $1 - p$ .

Losses of 100 and 2000 are observed.

Determine the likelihood function of  $p$ .

- (A)  $\left(\frac{pe^{-1}}{100} \cdot \frac{(1-p)e^{-0.01}}{10,000}\right) \cdot \left(\frac{pe^{-20}}{100} \cdot \frac{(1-p)e^{-0.2}}{10,000}\right)$
- (B)  $\left(\frac{pe^{-1}}{100} \cdot \frac{(1-p)e^{-0.01}}{10,000}\right) + \left(\frac{pe^{-20}}{100} \cdot \frac{(1-p)e^{-0.2}}{10,000}\right)$
- (C)  $\left(\frac{pe^{-1}}{100} + \frac{(1-p)e^{-0.01}}{10,000}\right) \cdot \left(\frac{pe^{-20}}{100} + \frac{(1-p)e^{-0.2}}{10,000}\right)$
- (D)  $\left(\frac{pe^{-1}}{100} + \frac{(1-p)e^{-0.01}}{10,000}\right) + \left(\frac{pe^{-20}}{100} + \frac{(1-p)e^{-0.2}}{10,000}\right)$
- (E)  $p\left(\frac{e^{-1}}{100} + \frac{e^{-0.01}}{10,000}\right) + (1-p)\left(\frac{e^{-20}}{100} + \frac{e^{-0.2}}{10,000}\right)$

**80.** DELETED

**81.** You wish to simulate a value,  $Y$  from a two point mixture.

With probability 0.3,  $Y$  is exponentially distributed with mean 0.5. With probability 0.7,  $Y$  is uniformly distributed on  $[-3, 3]$ . You simulate the mixing variable where low values correspond to the exponential distribution. Then you simulate the value of  $Y$ , where low random numbers correspond to low values of  $Y$ . Your uniform random numbers from  $[0, 1]$  are 0.25 and 0.69 in that order.

Calculate the simulated value of  $Y$ .

- (A) 0.19
- (B) 0.38
- (C) 0.59
- (D) 0.77
- (E) 0.95

- 82.**  $N$  is the random variable for the number of accidents in a single year.  $N$  follows the distribution:

$$\Pr(N = n) = 0.9(0.1)^{n-1}, \quad n = 1, 2, \dots$$

$X_i$  is the random variable for the claim amount of the  $i$ th accident.  $X_i$  follows the distribution:

$$g(x_i) = 0.01e^{-0.01x_i}, \quad x_i > 0, i = 1, 2, \dots$$

Let  $U$  and  $V_1, V_2, \dots$  be independent random variables following the uniform distribution on  $(0, 1)$ . You use the inversion method with  $U$  to simulate  $N$  and  $V_i$  to simulate  $X_i$ . You are given the following random numbers for the first simulation:

$u$	$v_1$	$v_2$	$v_3$	$v_4$
0.05	0.30	0.22	0.52	0.46

Calculate the total amount of claims during the year for the first simulation.

- (A) 0
- (B) 36
- (C) 72
- (D) 108
- (E) 144

**83.** You are the consulting actuary to a group of venture capitalists financing a search for pirate gold.

It's a risky undertaking: with probability 0.80, no treasure will be found, and thus the outcome is 0.

The rewards are high: with probability 0.20 treasure will be found. If treasure is found, its value is uniformly distributed on [1000, 5000].

You use the uniform (0,1) random numbers 0.75 and 0.85 and the inversion method to simulate two trials of the value of treasure found.

Calculate the average of the outcomes of these two trials.

- (A) 0
- (B) 1000
- (C) 2000
- (D) 3000
- (E) 4000

- 84.** A health plan implements an incentive to physicians to control hospitalization under which the physicians will be paid a bonus  $B$  equal to  $c$  times the amount by which total hospital claims are under 400 ( $0 \leq c \leq 1$ ).

The effect the incentive plan will have on underlying hospital claims is modeled by assuming that the new total hospital claims will follow a two-parameter Pareto distribution with  $\alpha = 2$  and  $\theta = 300$ .

$$E(B) = 100$$

Calculate  $c$ .

- (A) 0.44
- (B) 0.48
- (C) 0.52
- (D) 0.56
- (E) 0.60



**85.** Computer maintenance costs for a department are modeled as follows:

- (i) The distribution of the number of maintenance calls each machine will need in a year is Poisson with mean 3.
- (ii) The cost for a maintenance call has mean 80 and standard deviation 200.
- (iii) The number of maintenance calls and the costs of the maintenance calls are all mutually independent.

The department must buy a maintenance contract to cover repairs if there is at least a 10% probability that aggregate maintenance costs in a given year will exceed 120% of the expected costs.

Using the normal approximation for the distribution of the aggregate maintenance costs, calculate the minimum number of computers needed to avoid purchasing a maintenance contract.

- (A) 80
- (B) 90
- (C) 100
- (D) 110
- (E) 120

**86.** Aggregate losses for a portfolio of policies are modeled as follows:

- (i) The number of losses before any coverage modifications follows a Poisson distribution with mean  $\lambda$ .
- (ii) The severity of each loss before any coverage modifications is uniformly distributed between 0 and  $b$ .

The insurer would like to model the effect of imposing an ordinary deductible,  $d$  ( $0 < d < b$ ), on each loss and reimbursing only a percentage,  $c$  ( $0 < c \leq 1$ ), of each loss in excess of the deductible.

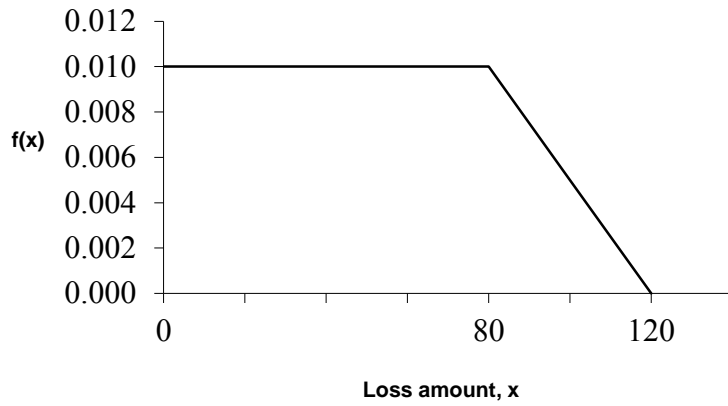
It is assumed that the coverage modifications will not affect the loss distribution.

The insurer models its claims with modified frequency and severity distributions. The modified claim amount is uniformly distributed on the interval  $[0, c(b-d)]$ .

Determine the mean of the modified frequency distribution.

- (A)  $\lambda$
- (B)  $\lambda c$
- (C)  $\lambda \frac{d}{b}$
- (D)  $\lambda \frac{b-d}{b}$
- (E)  $\lambda c \frac{b-d}{b}$

**87.** The graph of the density function for losses is:



Calculate the loss elimination ratio for an ordinary deductible of 20.

- (A) 0.20
- (B) 0.24
- (C) 0.28
- (D) 0.32
- (E) 0.36

- 88.** A towing company provides all towing services to members of the City Automobile Club. You are given:

Towing Distance	Towing Cost	Frequency
0-9.99 miles	80	50%
10-29.99 miles	100	40%
30+ miles	160	10%

- (i) The automobile owner must pay 10% of the cost and the remainder is paid by the City Automobile Club.
- (ii) The number of towings has a Poisson distribution with mean of 1000 per year.
- (iii) The number of towings and the costs of individual towings are all mutually independent.

Using the normal approximation for the distribution of aggregate towing costs, calculate the probability that the City Automobile Club pays more than 90,000 in any given year.

- (A) 3%
- (B) 10%
- (C) 50%
- (D) 90%
- (E) 97%

- 89.** You are given:
- (i) Losses follow an exponential distribution with the same mean in all years.
  - (ii) The loss elimination ratio this year is 70%.
  - (iii) The ordinary deductible for the coming year is  $\frac{4}{3}$  of the current deductible.

Calculate the loss elimination ratio for the coming year.

- (A) 70%
  - (B) 75%
  - (C) 80%
  - (D) 85%
  - (E) 90%
- 90.** Actuaries have modeled auto windshield claim frequencies. They have concluded that the number of windshield claims filed per year per driver follows the Poisson distribution with parameter  $\lambda$ , where  $\lambda$  follows the gamma distribution with mean 3 and variance 3.
- Calculate the probability that a driver selected at random will file no more than 1 windshield claim next year.
- (A) 0.15
  - (B) 0.19
  - (C) 0.20
  - (D) 0.24
  - (E) 0.31

- 91.** The number of auto vandalism claims reported per month at Sunny Daze Insurance Company (SDIC) has mean 110 and variance 750. Individual losses have mean 1101 and standard deviation 70. The number of claims and the amounts of individual losses are independent.

Using the normal approximation, calculate the probability that SDIC's aggregate auto vandalism losses reported for a month will be less than 100,000.

- (A) 0.24
- (B) 0.31
- (C) 0.36
- (D) 0.39
- (E) 0.49

- 92.** Prescription drug losses,  $S$ , are modeled assuming the number of claims has a geometric distribution with mean 4, and the amount of each prescription is 40.

Calculate  $E[(S - 100)_+]$ .

- (A) 60
- (B) 82
- (C) 92
- (D) 114
- (E) 146

- 93.** At the beginning of each round of a game of chance the player pays 12.5. The player then rolls one die with outcome  $N$ . The player then rolls  $N$  dice and wins an amount equal to the total of the numbers showing on the  $N$  dice. All dice have 6 sides and are fair.

Using the normal approximation, calculate the probability that a player starting with 15,000 will have at least 15,000 after 1000 rounds.

- (A) 0.01
- (B) 0.04
- (C) 0.06
- (D) 0.09
- (E) 0.12

- 94.**  $X$  is a discrete random variable with a probability function that is a member of the  $(a,b,0)$  class of distributions.

You are given:

- (i)  $\Pr(X = 0) = \Pr(X = 1) = 0.25$
- (ii)  $\Pr(X = 2) = 0.1875$

Calculate  $\Pr(X = 3)$ .

- (A) 0.120
- (B) 0.125
- (C) 0.130
- (D) 0.135
- (E) 0.140

- 95.** The number of claims in a period has a geometric distribution with mean 4. The amount of each claim  $X$  follows  $\Pr(X = x) = 0.25, \quad x = 1, 2, 3, 4,$  The number of claims and the claim amounts are independent.  $S$  is the aggregate claim amount in the period.

Calculate  $F_S(3)$ .

- (A) 0.27  
(B) 0.29  
(C) 0.31  
(D) 0.33  
(E) 0.35
- 96.** Insurance agent Hunt N. Quotum will receive no annual bonus if the ratio of incurred losses to earned premiums for his book of business is 60% or more for the year. If the ratio is less than 60%, Hunt's bonus will be a percentage of his earned premium equal to 15% of the difference between his ratio and 60%. Hunt's annual earned premium is 800,000.

Incurred losses are distributed according to the Pareto distribution, with  $\theta = 500,000$  and  $\alpha = 2$ .

Calculate the expected value of Hunt's bonus.

- (A) 13,000  
(B) 17,000  
(C) 24,000  
(D) 29,000  
(E) 35,000



- 97.** A group dental policy has a negative binomial claim count distribution with mean 300 and variance 800.

Ground-up severity is given by the following table:

Severity	Probability
40	0.25
80	0.25
120	0.25
200	0.25

You expect severity to increase 50% with no change in frequency. You decide to impose a per claim deductible of 100.

Calculate the expected total claim payment after these changes.

- (A) Less than 18,000
- (B) At least 18,000, but less than 20,000
- (C) At least 20,000, but less than 22,000
- (D) At least 22,000, but less than 24,000
- (E) At least 24,000

**98.** You own a light bulb factory. Your workforce is a bit clumsy – they keep dropping boxes of light bulbs. The boxes have varying numbers of light bulbs in them, and when dropped, the entire box is destroyed.

You are given:

- Expected number of boxes dropped per month: 50
- Variance of the number of boxes dropped per month: 100
- Expected value per box: 200
- Variance of the value per box: 400

You pay your employees a bonus if the value of light bulbs destroyed in a month is less than 8000.

Assuming independence and using the normal approximation, calculate the probability that you will pay your employees a bonus next month.

- (A) 0.16
- (B) 0.19
- (C) 0.23
- (D) 0.27
- (E) 0.31

**99.** For a certain company, losses follow a Poisson frequency distribution with mean 2 per year, and the amount of a loss is 1, 2, or 3, each with probability  $1/3$ . Loss amounts are independent of the number of losses, and of each other.

An insurance policy covers all losses in a year, subject to an annual aggregate deductible of 2.

Calculate the expected claim payments for this insurance policy.

- (A) 2.00
- (B) 2.36
- (C) 2.45
- (D) 2.81
- (E) 2.96

- 100.** The unlimited severity distribution for claim amounts under an auto liability insurance policy is given by the cumulative distribution:

$$F(x) = 1 - 0.8e^{-0.02x} - 0.2e^{-0.001x}, \quad x \geq 0$$

The insurance policy pays amounts up to a limit of 1000 per claim.

Calculate the expected payment under this policy for one claim.

- (A) 57
- (B) 108
- (C) 166
- (D) 205
- (E) 240

- 101.** The random variable for a loss,  $X$ , has the following characteristics:

$x$	$F(x)$	$E(X \wedge x)$
0	0.0	0
100	0.2	91
200	0.6	153
1000	1.0	331

Calculate the mean excess loss for a deductible of 100.

- (A) 250
- (B) 300
- (C) 350
- (D) 400
- (E) 450

**102.** WidgetsRUs owns two factories. It buys insurance to protect itself against major repair costs. Profit equals revenues, less the sum of insurance premiums, retained major repair costs, and all other expenses. WidgetsRUs will pay a dividend equal to the profit, if it is positive.

You are given:

- (i) Combined revenue for the two factories is 3.
- (ii) Major repair costs at the factories are independent.
- (iii) The distribution of major repair costs for each factory is

<u><math>k</math></u>	<u>Prob (<math>k</math>)</u>
0	0.4
1	0.3
2	0.2
3	0.1

- (iv) At each factory, the insurance policy pays the major repair costs in excess of that factory's ordinary deductible of 1. The insurance premium is 110% of the expected claims.
- (v) All other expenses are 15% of revenues.

Calculate the expected dividend.

- (A) 0.43
- (B) 0.47
- (C) 0.51
- (D) 0.55
- (E) 0.59

**103.** DELETED

**104.** Glen is practicing his simulation skills. He generates 1000 values of the random variable  $X$  as follows:

- (i) He generates a value of  $\lambda$  from the gamma distribution with  $\alpha = 2$  and  $\theta = 1$  (hence with mean 2 and variance 2).
- (ii) He then generates  $x$  from the Poisson distribution with mean  $\lambda$
- (iii) He repeats the process 999 more times: first generating a value  $\lambda$ , then generating  $x$  from the Poisson distribution with mean  $\lambda$ .
- (iv) The repetitions are mutually independent.

Calculate the expected number of times that his simulated value of  $X$  is 3.

- (A) 75
- (B) 100
- (C) 125
- (D) 150
- (E) 175

**105.** An actuary for an automobile insurance company determines that the distribution of the annual number of claims for an insured chosen at random is modeled by the negative binomial distribution with mean 0.2 and variance 0.4.

The number of claims for each individual insured has a Poisson distribution and the means of these Poisson distributions are gamma distributed over the population of insureds.

Calculate the variance of this gamma distribution.

- (A) 0.20
- (B) 0.25
- (C) 0.30
- (D) 0.35
- (E) 0.40

**106.** A dam is proposed for a river that is currently used for salmon breeding. You have modeled:

- (i) For each hour the dam is opened the number of salmon that will pass through and reach the breeding grounds has a distribution with mean 100 and variance 900.
- (ii) The number of eggs released by each salmon has a distribution with mean 5 and variance 5.
- (iii) The number of salmon going through the dam each hour it is open and the numbers of eggs released by the salmon are independent.

Using the normal approximation for the aggregate number of eggs released, calculate the least number of whole hours the dam should be left open so the probability that 10,000 eggs will be released is greater than 95%.

- (A) 20
- (B) 23
- (C) 26
- (D) 29
- (E) 32

**107.** For a stop-loss insurance on a three person group:

- (i) Loss amounts are independent.
- (ii) The distribution of loss amount for each person is:

Loss Amount	Probability
0	0.4
1	0.3
2	0.2
3	0.1

- (iii) The stop-loss insurance has a deductible of 1 for the group.

Calculate the net stop-loss premium.

- (A) 2.00
- (B) 2.03
- (C) 2.06
- (D) 2.09
- (E) 2.12

**108.** For a discrete probability distribution, you are given the recursion relation

$$p(k) = \frac{2}{k} p(k-1), \quad k = 1, 2, \dots$$

Calculate  $p(4)$ .

- (A) 0.07
- (B) 0.08
- (C) 0.09
- (D) 0.10
- (E) 0.11

**109.** A company insures a fleet of vehicles. Aggregate losses have a compound Poisson distribution. The expected number of losses is 20. Loss amounts, regardless of vehicle type, have exponential distribution with  $\theta = 200$ .

To reduce the cost of the insurance, two modifications are to be made:

- (i) a certain type of vehicle will not be insured. It is estimated that this will reduce loss frequency by 20%.
- (ii) a deductible of 100 per loss will be imposed.

Calculate the expected aggregate amount paid by the insurer after the modifications.

- (A) 1600
- (B) 1940
- (C) 2520
- (D) 3200
- (E) 3880

**110.** You are the producer of a television quiz show that gives cash prizes. The number of prizes,  $N$ , and prize amounts,  $X$ , have the following distributions:

$n$	$\Pr(N = n)$	$x$	$\Pr(X = x)$
1	0.8	0	0.2
2	0.2	100	0.7
		1000	0.1

Your budget for prizes equals the expected prizes plus the standard deviation of prizes.

Calculate your budget.

- (A) 306
- (B) 316
- (C) 416
- (D) 510
- (E) 518



**111.** The number of accidents follows a Poisson distribution with mean 12. Each accident generates 1, 2, or 3 claimants with probabilities  $1/2$ ,  $1/3$ , and  $1/6$ , respectively.

Calculate the variance of the total number of claimants.

- (A) 20
- (B) 25
- (C) 30
- (D) 35
- (E) 40

**112.** In a clinic, physicians volunteer their time on a daily basis to provide care to those who are not eligible to obtain care otherwise. The number of physicians who volunteer in any day is uniformly distributed on the integers 1 through 5. The number of patients that can be served by a given physician has a Poisson distribution with mean 30.

Determine the probability that 120 or more patients can be served in a day at the clinic, using the normal approximation with continuity correction.

- (A)  $1 - \Phi(0.68)$
- (B)  $1 - \Phi(0.72)$
- (C)  $1 - \Phi(0.93)$
- (D)  $1 - \Phi(3.13)$
- (E)  $1 - \Phi(3.16)$

**113.** The number of claims,  $N$ , made on an insurance portfolio follows the following distribution:

$n$	$\Pr(N = n)$
0	0.7
2	0.2
3	0.1

If a claim occurs, the benefit is 0 or 10 with probability 0.8 and 0.2, respectively.

The number of claims and the benefit for each claim are independent.

Calculate the probability that aggregate benefits will exceed expected benefits by more than 2 standard deviations.

- (A) 0.02
- (B) 0.05
- (C) 0.07
- (D) 0.09
- (E) 0.12

**114.** A claim count distribution can be expressed as a mixed Poisson distribution. The mean of the Poisson distribution is uniformly distributed over the interval  $[0, 5]$ .

Calculate the probability that there are 2 or more claims.

- (A) 0.61
- (B) 0.66
- (C) 0.71
- (D) 0.76
- (E) 0.81

**115.** A claim severity distribution is exponential with mean 1000. An insurance company will pay the amount of each claim in excess of a deductible of 100.

Calculate the variance of the amount paid by the insurance company for one claim, including the possibility that the amount paid is 0.

- (A) 810,000
- (B) 860,000
- (C) 900,000
- (D) 990,000
- (E) 1,000,000

**116.** Total hospital claims for a health plan were previously modeled by a two-parameter Pareto distribution with  $\alpha = 2$  and  $\theta = 500$ .

The health plan begins to provide financial incentives to physicians by paying a bonus of 50% of the amount by which total hospital claims are less than 500. No bonus is paid if total claims exceed 500.

Total hospital claims for the health plan are now modeled by a new Pareto distribution with  $\alpha = 2$  and  $\theta = K$ . The expected claims plus the expected bonus under the revised model equals expected claims under the previous model.

Calculate  $K$ .

- (A) 250
- (B) 300
- (C) 350
- (D) 400
- (E) 450

**117.** For an industry-wide study of patients admitted to hospitals for treatment of cardiovascular illness in 1998, you are given:

(i)

Duration In Days	Number of Patients Remaining Hospitalized
0	4,386,000
5	1,461,554
10	486,739
15	161,801
20	53,488
25	17,384
30	5,349
35	1,337
40	0

(ii) Discharges from the hospital are uniformly distributed between the durations shown in the table.

Calculate the mean residual time remaining hospitalized, in days, for a patient who has been hospitalized for 21 days.

- (A) 4.4
- (B) 4.9
- (C) 5.3
- (D) 5.8
- (E) 6.3

**118.** For an individual over 65:

- (i) The number of pharmacy claims is a Poisson random variable with mean 25.
- (ii) The amount of each pharmacy claim is uniformly distributed between 5 and 95.
- (iii) The amounts of the claims and the number of claims are mutually independent.

Determine the probability that aggregate claims for this individual will exceed 2000 using the normal approximation.

- (A)  $1 - \Phi(1.33)$
- (B)  $1 - \Phi(1.66)$
- (C)  $1 - \Phi(2.33)$
- (D)  $1 - \Phi(2.66)$
- (E)  $1 - \Phi(3.33)$

**119.** DELETED

**120** An insurer has excess-of-loss reinsurance on auto insurance. You are given:

- (i) Total expected losses in the year 2001 are 10,000,000.
- (ii) In the year 2001 individual losses have a Pareto distribution with

$$F(x) = 1 - \left( \frac{2000}{x + 2000} \right)^2, \quad x > 0$$

- (iii) Reinsurance will pay the excess of each loss over 3000.
- (iv) Each year, the reinsurer is paid a ceded premium,  $C_{\text{year}}$  equal to 110% of the expected losses covered by the reinsurance.
- (v) Individual losses increase 5% each year due to inflation.
- (vi) The frequency distribution does not change.

Calculate  $C_{2002} / C_{2001}$ .

- (A) 1.04
- (B) 1.05
- (C) 1.06
- (D) 1.07
- (E) 1.08

**121.** DELETED

**122.** You are simulating a compound claims distribution:

- (i) The number of claims,  $N$ , is binomial with  $m = 3$  and mean 1.8.
- (ii) Claim amounts are uniformly distributed on  $[1, 2, 3, 4, 5]$ .
- (iii) Claim amounts are independent, and are independent of the number of claims.
- (iv) You simulate the number of claims,  $N$ , then the amounts of each of those claims,  $X_1, X_2, \dots, X_N$ . Then you repeat another  $N$ , its claim amounts, and so on until you have performed the desired number of simulations.
- (v) When the simulated number of claims is 0, you do not simulate any claim amounts.
- (vi) All simulations use the inversion method.
- (vii) Your uniform (0,1) random numbers are 0.7, 0.1, 0.3, 0.1, 0.9, 0.5, 0.5, 0.7, 0.3, and 0.1.

Calculate the aggregate claim amount associated with your third simulated value of  $N$ .

- (A) 3
- (B) 5
- (C) 7
- (D) 9
- (E) 11

**123.** Annual prescription drug costs are modeled by a two-parameter Pareto distribution with  $\theta = 2000$  and  $\alpha = 2$ .

A prescription drug plan pays annual drug costs for an insured member subject to the following provisions:

- (i) The insured pays 100% of costs up to the ordinary annual deductible of 250.
- (ii) The insured then pays 25% of the costs between 250 and 2250.
- (iii) The insured pays 100% of the costs above 2250 until the insured has paid 3600 in total.
- (iv) The insured then pays 5% of the remaining costs.

Calculate the expected annual plan payment.

- (A) 1120
- (B) 1140
- (C) 1160
- (D) 1180
- (E) 1200



**124.** DELETED

**125.** Two types of insurance claims are made to an insurance company. For each type, the number of claims follows a Poisson distribution and the amount of each claim is uniformly distributed as follows:

Type of Claim	Poisson Parameter $\lambda$ for Number of Claims in one year	Range of Each Claim Amount
I	12	(0, 1)
II	4	(0, 5)

The numbers of claims of the two types are independent and the claim amounts and claim numbers are independent.

Calculate the normal approximation to the probability that the total of claim amounts in one year exceeds 18.

- (A) 0.37
- (B) 0.39
- (C) 0.41
- (D) 0.43
- (E) 0.45

**126.** The number of annual losses has a Poisson distribution with a mean of 5. The size of each loss has a two-parameter Pareto distribution with  $\theta = 10$  and  $\alpha = 2.5$ . An insurance for the losses has an ordinary deductible of 5 per loss.

Calculate the expected value of the aggregate annual payments for this insurance.

- (A) 8
- (B) 13
- (C) 18
- (D) 23
- (E) 28

**127.** Losses in 2003 follow a two-parameter Pareto distribution with  $\alpha = 2$  and  $\theta = 5$ . Losses in 2004 are uniformly 20% higher than in 2003. An insurance covers each loss subject to an ordinary deductible of 10.

Calculate the Loss Elimination Ratio in 2004.

- (A)  $5/9$
- (B)  $5/8$
- (C)  $2/3$
- (D)  $3/4$
- (E)  $4/5$

**128.** DELETED

**129.** DELETED

**130.** Bob is a carnival operator of a game in which a player receives a prize worth  $W = 2^N$  if the player has  $N$  successes,  $N = 0, 1, 2, 3, \dots$ . Bob models the probability of success for a player as follows:

- (i)  $N$  has a Poisson distribution with mean  $\Lambda$ .
- (ii)  $\Lambda$  has a uniform distribution on the interval  $(0, 4)$ .

Calculate  $E[W]$ .

- (A) 5
- (B) 7
- (C) 9
- (D) 11
- (E) 13

**131.** You are simulating the gain/loss from insurance where:

- (i) Claim occurrences follow a Poisson process with  $\lambda = 2/3$  per year.
- (ii) Each claim amount is 1, 2 or 3 with  $p(1) = 0.25$ ,  $p(2) = 0.25$ , and  $p(3) = 0.50$ .
- (iii) Claim occurrences and amounts are independent.
- (iv) The annual premium equals expected annual claims plus 1.8 times the standard deviation of annual claims.
- (v)  $i = 0$

You use the uniform (0,1) values 0.25, 0.40, 0.60, and 0.80 and the inversion method to simulate time between claims.

You use the uniform (0,1) values 0.30, 0.60, 0.20, and 0.70 and the inversion method to simulate claim size.

Calculate the gain or loss from the insurer's viewpoint during the first 2 years from this simulation.

- (A) loss of 5
- (B) loss of 4
- (C) 0
- (D) gain of 4
- (E) gain of 5

**132.** Annual dental claims are modeled as a compound Poisson process where the number of claims has mean 2 and the loss amounts have a two-parameter Pareto distribution with  $\theta = 500$  and  $\alpha = 2$ .

An insurance pays 80% of the first 750 of annual losses and 100% of annual losses in excess of 750.

You simulate the number of claims and loss amounts using the inversion method.

The random number to simulate the number of claims is 0.8. The random numbers to simulate loss amounts are 0.60, 0.25, 0.70, 0.10 and 0.80.

Calculate the total simulated insurance claims for one year.

- (A) 294
- (B) 625
- (C) 631
- (D) 646
- (E) 658

**133.** You are given:

- (i) The annual number of claims for an insured has probability function:

$$p(x) = \binom{3}{x} q^x (1-q)^{3-x}, \quad x = 0, 1, 2, 3$$

- (ii) The prior density is  $\pi(q) = 2q$ ,  $0 < q < 1$ .

A randomly chosen insured has zero claims in Year 1.

Using Bühlmann credibility, calculate the estimate of the number of claims in Year 2 for the selected insured.

- (A) 0.33  
(B) 0.50  
(C) 1.00  
(D) 1.33  
(E) 1.50

**134.** You are given the following random sample of 13 claim amounts:

99 133 175 216 250 277 651 698 735 745 791 906 947

Calculate the smoothed empirical estimate of the 35th percentile.

- (A) 219.4  
(B) 231.3  
(C) 234.7  
(D) 246.6  
(E) 256.8

**135.** For observation  $i$  of a survival study:

- $d_i$  is the left truncation point
- $x_i$  is the observed value if not right censored
- $u_i$  is the observed value if right censored

You are given:

Observation ( $i$ )	$d_i$	$x_i$	$u_i$
1	0	0.9	–
2	0	–	1.2
3	0	1.5	–
4	0	–	1.5
5	0	–	1.6
6	0	1.7	–
7	0	–	1.7
8	1.3	2.1	–
9	1.5	2.1	–
10	1.6	–	2.3

Calculate the Kaplan-Meier Product-Limit estimate,  $\hat{S}_{10}(1.6)$ .

- (A) Less than 0.55
- (B) At least 0.55, but less than 0.60
- (C) At least 0.60, but less than 0.65
- (D) At least 0.65, but less than 0.70
- (E) At least 0.70

**136.** You are given:

(i) Two classes of policyholders have the following severity distributions:

Claim Amount	Probability of Claim Amount for Class 1	Probability of Claim Amount for Class 2
250	0.5	0.7
2,500	0.3	0.2
60,000	0.2	0.1

(ii) Class 1 has twice as many claims as Class 2.

A claim of 250 is observed.

Calculate the Bayesian estimate of the expected value of a second claim from the same policyholder.

- (A) Less than 10,200
- (B) At least 10,200, but less than 10,400
- (C) At least 10,400, but less than 10,600
- (D) At least 10,600, but less than 10,800
- (E) At least 10,800

**137.** You are given the following three observations:

0.74   0.81   0.95

You fit a distribution with the following density function to the data:

$$f(x) = (p+1)x^p, \quad 0 < x < 1, \quad p > -1$$

Calculate the maximum likelihood estimate of  $p$ .

- (A) 4.0
- (B) 4.1
- (C) 4.2
- (D) 4.3
- (E) 4.4



**138.** You are given the following sample of claim counts:

0      0      1      2      2

You fit a binomial( $m, q$ ) model with the following requirements:

- (i) The mean of the fitted model equals the sample mean.
- (ii) The 33rd percentile of the fitted model equals the smoothed empirical 33rd percentile of the sample.

Calculate the smallest estimate of  $m$  that satisfies these requirements.

- (A) 2
- (B) 3
- (C) 4
- (D) 5
- (E) 6

- 139.** Members of three classes of insureds can have 0, 1 or 2 claims, with the following probabilities:

Class	Number of Claims		
	0	1	2
I	0.9	0.0	0.1
II	0.8	0.1	0.1
III	0.7	0.2	0.1

A class is chosen at random, and varying numbers of insureds from that class are observed over 2 years, as shown below:

Year	Number of Insureds	Number of Claims
1	20	7
2	30	10

Calculate the Bühlmann-Straub credibility estimate of the number of claims in Year 3 for 35 insureds from the same class.

- (A) 10.6
- (B) 10.9
- (C) 11.1
- (D) 11.4
- (E) 11.6

**140.** You are given the following random sample of 30 auto claims:

54    140    230    560    600    1,100    1,500    1,800    1,920    2,000  
2,450    2,500    2,580    2,910    3,800    3,800    3,810    3,870    4,000    4,800  
7,200    7,390    11,750    12,000    15,000    25,000    30,000    32,300    35,000    55,000

You test the hypothesis that auto claims follow a continuous distribution  $F(x)$  with the following percentiles:

$x$	310	500	2,498	4,876	7,498	12,930
$F(x)$	0.16	0.27	0.55	0.81	0.90	0.95

You group the data using the largest number of groups such that the expected number of claims in each group is at least 5.

Calculate the chi-square goodness-of-fit statistic.

- (A) Less than 7
- (B) At least 7, but less than 10
- (C) At least 10, but less than 13
- (D) At least 13, but less than 16
- (E) At least 16

**141.** The interval  $(0.357, 0.700)$  is a 95% log-transformed confidence interval for the cumulative hazard rate function at time  $t$ , where the cumulative hazard rate function is estimated using the Nelson-Aalen estimator.

Calculate the value of the Nelson-Aalen estimate of  $S(t)$ .

- (A) 0.50
- (B) 0.53
- (C) 0.56
- (D) 0.59
- (E) 0.61

**142.** You are given:

- (i) The number of claims observed in a 1-year period has a Poisson distribution with mean  $\theta$ .
- (ii) The prior density is:

$$\pi(\theta) = \frac{e^{-\theta}}{1 - e^{-k}}, \quad 0 < \theta < k$$

- (iii) The unconditional probability of observing zero claims in 1 year is 0.575.

Calculate  $k$ .

- (A) 1.5
- (B) 1.7
- (C) 1.9
- (D) 2.1
- (E) 2.3

**143.** The parameters of the inverse Pareto distribution

$$F(x) = \left( \frac{x}{x + \theta} \right)^\tau$$

are to be estimated using the method of moments based on the following data:

15    45    140    250    560    1340

Calculate the estimate of  $\theta$  obtained by matching  $k$ th moments with  $k = -1$  and  $k = -2$ .

- (A) Less than 1
- (B) At least 1, but less than 5
- (C) At least 5, but less than 25
- (D) At least 25, but less than 50
- (E) At least 50

- 144.** A sample of claim amounts is  $\{300, 600, 1500\}$ . By applying the deductible to this sample, the loss elimination ratio for a deductible of 100 per claim is estimated to be 0.125.

You are given the following simulations from the sample:

Simulation	Claim Amounts		
1	600	600	1500
2	1500	300	1500
3	1500	300	600
4	600	600	300
5	600	300	1500
6	600	600	1500
7	1500	1500	1500
8	1500	300	1500
9	300	600	300
10	600	600	600

Calculate the bootstrap approximation to the mean square error of the estimate.

- (A) 0.003
- (B) 0.010
- (C) 0.021
- (D) 0.054
- (E) 0.081

**145.** You are given the following commercial automobile policy experience:

	Company	Year 1	Year 2	Year 3
Losses	I	50,000	50,000	?
Number of Automobiles		100	200	?
Losses	II	?	150,000	150,000
Number of Automobiles		?	500	300
Losses	III	150,000	?	150,000
Number of Automobiles		50	?	150

Calculate the nonparametric empirical Bayes credibility factor,  $Z$ , for Company III.

- (A) Less than 0.2
- (B) At least 0.2, but less than 0.4
- (C) At least 0.4, but less than 0.6
- (D) At least 0.6, but less than 0.8
- (E) At least 0.8

- 146.** Let  $x_1, x_2, \dots, x_n$  and  $y_1, y_2, \dots, y_m$  denote independent random samples of losses from Region 1 and Region 2, respectively. Single-parameter Pareto distributions with  $\theta = 1$ , but different values of  $\alpha$  are used to model losses in these regions.

Past experience indicates that the expected value of losses in Region 2 is 1.5 times the expected value of losses in Region 1. You intend to calculate the maximum likelihood estimate of  $\alpha$  for Region 1, using the data from both regions.

Which of the following equations must be solved?

- (A)  $\frac{n}{\alpha} - \sum \ln(x_i) = 0$
- (B)  $\frac{n}{\alpha} - \sum \ln(x_i) + \frac{m(\alpha + 2)}{3\alpha} - \frac{2\sum \ln(y_i)}{(\alpha + 2)^2} = 0$
- (C)  $\frac{n}{\alpha} - \sum \ln(x_i) + \frac{2m}{3\alpha(\alpha + 2)} - \frac{2\sum \ln(y_i)}{(\alpha + 2)^2} = 0$
- (D)  $\frac{n}{\alpha} - \sum \ln(x_i) + \frac{2m}{\alpha(\alpha + 2)} - \frac{6\sum \ln(y_i)}{(\alpha + 2)^2} = 0$
- (E)  $\frac{n}{\alpha} - \sum \ln(x_i) + \frac{3m}{\alpha(3 - \alpha)} - \frac{6\sum \ln(y_i)}{(3 - \alpha)^2} = 0$

- 147.** From a population having distribution function  $F$ , you are given the following sample:

2.0, 3.3, 3.3, 4.0, 4.0, 4.7, 4.7, 4.7

Calculate the kernel density estimate of  $F(4)$ , using the uniform kernel with bandwidth 1.4.

- (A) 0.31
- (B) 0.41
- (C) 0.50
- (D) 0.53
- (E) 0.63

**148.** You are given:

- (i) The number of claims has probability function:

$$p(x) = \binom{m}{x} q^x (1-q)^{m-x}, \quad x = 0, 1, \dots, m$$

- (ii) The actual number of claims must be within 1% of the expected number of claims with probability 0.95.
- (iii) The expected number of claims for full credibility is 34,574.

Calculate  $q$ .

- (A) 0.05
- (B) 0.10
- (C) 0.20
- (D) 0.40
- (E) 0.80

**149.** DELETED



**150.** You are given:

- (i) Losses are uniformly distributed on  $(0, \theta)$  with  $\theta > 150$ .
- (ii) The policy limit is 150.
- (iii) A sample of payments is:

14, 33, 72, 94, 120, 135, 150, 150

Calculate the estimate of  $\theta$  obtained by matching the average sample payment to the expected payment per loss.

- (A) 192
- (B) 196
- (C) 200
- (D) 204
- (E) 208

**151.** You are given:

- (i) A portfolio of independent risks is divided into two classes.
- (ii) Each class contains the same number of risks.
- (iii) For each risk in Class 1, the number of claims per year follows a Poisson distribution with mean 5.
- (iv) For each risk in Class 2, the number of claims per year follows a binomial distribution with  $m = 8$  and  $q = 0.55$ .
- (v) A randomly selected risk has three claims in Year 1,  $r$  claims in Year 2 and four claims in Year 3.

The Bühlmann credibility estimate for the number of claims in Year 4 for this risk is 4.6019.

Calculate  $r$ .

- (A) 1
- (B) 2
- (C) 3
- (D) 4
- (E) 5

**152.** You are given:

(i) A sample of losses is:

600    700    900

(ii) No information is available about losses of 500 or less.

(iii) Losses are assumed to follow an exponential distribution with mean  $\theta$ .

Calculate the maximum likelihood estimate of  $\theta$ .

(A) 233

(B) 400

(C) 500

(D) 733

(E) 1233

**153.** DELETED

**154.** You are given:

- (v) Claim counts follow a Poisson distribution with mean  $\lambda$ .
- (vi) Claim sizes follow a lognormal distribution with parameters  $\mu$  and  $\sigma$ .
- (vii) Claim counts and claim sizes are independent.
- (viii) The prior distribution has joint probability density function:

$$f(\lambda, \mu, \sigma) = 2\sigma, \quad 0 < \lambda < 1, 0 < \mu < 1, 0 < \sigma < 1$$

Calculate Bühlmann's  $k$  for aggregate losses.

- (A) Less than 2
- (B) At least 2, but less than 4
- (C) At least 4, but less than 6
- (D) At least 6, but less than 8
- (E) At least 8

**155.** You are given the following data:

0.49   0.51   0.66   1.82   3.71   5.20   7.62   12.66   35.24

You use the method of percentile matching at the 40th and 80th percentiles to fit an inverse Weibull distribution to these data.

Calculate the estimate of  $\theta$ .

- (A) Less than 1.35
- (B) At least 1.35, but less than 1.45
- (C) At least 1.45, but less than 1.55
- (D) At least 1.55, but less than 1.65
- (E) At least 1.65

**156.** You are given:

- (i) The number of claims follows a Poisson distribution with mean  $\lambda$ .
- (ii) Observations other than 0 and 1 have been deleted from the data.
- (iii) The data contain an equal number of observations of 0 and 1.

Calculate the maximum likelihood estimate of  $\lambda$ .

- (A) 0.50
- (B) 0.75
- (C) 1.00
- (D) 1.25
- (E) 1.50

**157.** You are given:

- (i) In a portfolio of risks, each policyholder can have at most one claim per year.
- (ii) The probability of a claim for a policyholder during a year is  $q$ .
- (iii) The prior density is  $\pi(q) = \frac{q^3}{0.07}$ ,  $0.6 < q < 0.8$

A randomly selected policyholder has one claim in Year 1 and zero claims in Year 2.

For this policyholder, calculate the posterior probability that  $0.7 < q < 0.8$ .

- (A) Less than 0.3
- (B) At least 0.3, but less than 0.4
- (C) At least 0.4, but less than 0.5
- (D) At least 0.5, but less than 0.6
- (E) At least 0.6

**158.** You are given:

(i) The following is a sample of 15 losses:

11, 22, 22, 22, 36, 51, 69, 69, 69, 92, 92, 120, 161, 161, 230

(ii)  $\hat{H}_1(x)$  is the Nelson-Aalen empirical estimate of the cumulative hazard rate function.

(iii)  $\hat{H}_2(x)$  is the maximum likelihood estimate of the cumulative hazard rate function under the assumption that the sample is drawn from an exponential distribution.

Calculate  $|\hat{H}_2(75) - \hat{H}_1(75)|$ .

(A) 0.00

(B) 0.11

(C) 0.22

(D) 0.33

(E) 0.44

**159.** For a portfolio of motorcycle insurance policyholders, you are given:

- (i) The number of claims for each policyholder has a conditional Poisson distribution.
- (ii) For Year 1, the following data are observed:

Number of Claims	<i>Number of Policyholders</i>
0	2000
1	600
2	300
3	80
4	20
Total	3000

Calculate the credibility factor,  $Z$ , for Year 2.

- (A) Less than 0.30
- (B) At least 0.30, but less than 0.35
- (C) At least 0.35, but less than 0.40
- (D) At least 0.40, but less than 0.45
- (E) At least 0.45

**160.** You are given a random sample of observations:

0.1    0.2    0.5    0.7    1.3

You test the hypothesis that the probability density function is:

$$f(x) = \frac{4}{(1+x)^5}, \quad x > 0$$

Calculate the Kolmogorov-Smirnov test statistic.

- (A) Less than 0.05
- (B) At least 0.05, but less than 0.15
- (C) At least 0.15, but less than 0.25
- (D) At least 0.25, but less than 0.35
- (E) At least 0.35

**161.** Which of the following statements is true?

- (A) A uniformly minimum variance unbiased estimator is an estimator such that no other estimator has a smaller variance.
- (B) An estimator is consistent whenever the variance of the estimator approaches zero as the sample size increases to infinity.
- (C) A consistent estimator is also unbiased.
- (D) For an unbiased estimator, the mean squared error is always equal to the variance.
- (E) One computational advantage of using mean squared error is that it is not a function of the true value of the parameter.



- 162.** A loss,  $X$ , follows a 2-parameter Pareto distribution with  $\alpha = 2$  and unspecified parameter  $\theta$ . You are given:

$$E[X - 100 | X > 100] = \frac{5}{3} E[X - 50 | X > 50]$$

Calculate  $E[X - 150 | X > 150]$ .

- (A) 150
  - (B) 175
  - (C) 200
  - (D) 225
  - (E) 250
- 163.** The scores on the final exam in Ms. B's Latin class have a normal distribution with mean  $\theta$  and standard deviation equal to 8.  $\theta$  is a random variable with a normal distribution with mean 75 and standard deviation 6.

Each year, Ms. B chooses a student at random and pays the student 1 times the student's score. However, if the student fails the exam (score  $< 65$ ), then there is no payment.

Calculate the conditional probability that the payment is less than 90, given that there is a payment.

- (A) 0.77
- (B) 0.85
- (C) 0.88
- (D) 0.92
- (E) 1.00

**164.** For a collective risk model the number of losses,  $N$ , has a Poisson distribution with  $\lambda = 20$ . The common distribution of the individual losses has the following characteristics:

- (i)  $E[X] = 70$
- (ii)  $E[X \wedge 30] = 25$
- (iii)  $\Pr(X > 30) = 0.75$
- (iv)  $E[X^2 | X > 30] = 9000$

An insurance covers aggregate losses subject to an ordinary deductible of 30 per loss.

Calculate the variance of the aggregate payments of the insurance.

- (A) 54,000
- (B) 67,500
- (C) 81,000
- (D) 94,500
- (E) 108,000

**165.** For a collective risk model:

- (i) The number of losses has a Poisson distribution with  $\lambda = 2$ .
- (ii) The common distribution of the individual losses is:

$x$	$f_X(x)$
1	0.6
2	0.4

An insurance covers aggregate losses subject to a deductible of 3.

Calculate the expected aggregate payments of the insurance.

- (A) 0.74
- (B) 0.79
- (C) 0.84
- (D) 0.89
- (E) 0.94

**166.** A discrete probability distribution has the following properties:

- (i)  $p_k = c \left(1 + \frac{1}{k}\right) p_{k-1}$  for  $k = 1, 2, \dots$
- (ii)  $p_0 = 0.5$

Calculate  $c$ .

- (A) 0.06
- (B) 0.13
- (C) 0.29
- (D) 0.35

(E) 0.40

**167.** The repair costs for boats in a marina have the following characteristics:

Boat type	Number of boats	Probability that repair is needed	Mean of repair cost given a repair	Variance of repair cost given a repair
Power boats	100	0.3	300	10,000
Sailboats	300	0.1	1000	400,000
Luxury yachts	50	0.6	5000	2,000,000

At most one repair is required per boat each year. Repair incidence and cost are mutually independent.

The marina budgets an amount,  $Y$ , equal to the aggregate mean repair costs plus the standard deviation of the aggregate repair costs.

Calculate  $Y$ .

- (A) 200,000
- (B) 210,000
- (C) 220,000
- (D) 230,000
- (E) 240,000

**168.** For an insurance:

- (i) Losses can be 100, 200 or 300 with respective probabilities 0.2, 0.2, and 0.6.
- (ii) The insurance has an ordinary deductible of 150 per loss.
- (iii)  $Y^P$  is the claim payment per payment random variable.

Calculate  $\text{Var}(Y^P)$ .

- (A) 1500
- (B) 1875
- (C) 2250
- (D) 2625
- (E) 3000

**169.** The distribution of a loss,  $X$ , is a two-point mixture:

- (i) With probability 0.8,  $X$  has a two-parameter Pareto distribution with  $\alpha = 2$  and  $\theta = 100$ .
- (ii) With probability 0.2,  $X$  has a two-parameter Pareto distribution with  $\alpha = 4$  and  $\theta = 3000$ .

Calculate  $\text{Pr}(X \leq 200)$ .

- (A) 0.76
- (B) 0.79
- (C) 0.82
- (D) 0.85
- (E) 0.88

**170.** In a certain town the number of common colds an individual will get in a year follows a Poisson distribution that depends on the individual's age and smoking status. The distribution of the population and the mean number of colds are as follows:

	Proportion of population	Mean number of colds
Children	0.30	3
Adult Non-Smokers	0.60	1
Adult Smokers	0.10	4

Calculate the conditional probability that a person with exactly 3 common colds in a year is an adult smoker.

- (A) 0.12
- (B) 0.16
- (C) 0.20
- (D) 0.24
- (E) 0.28

**171.** For aggregate losses,  $S$ :

- (i) The number of losses has a negative binomial distribution with mean 3 and variance 3.6.
- (ii) The common distribution of the independent individual loss amounts is uniform from 0 to 20.

Calculate the 95<sup>th</sup> percentile of the distribution of  $S$  as approximated by the normal distribution.

- (A) 61
- (B) 63
- (C) 65
- (D) 67
- (E) 69

**172.** You are given:

- (i) A random sample of five observations from a population is:

0.2    0.7    0.9    1.1    1.3

- (ii) You use the Kolmogorov-Smirnov test for testing the null hypothesis,  $H_0$ , that the probability density function for the population is:

$$f(x) = \frac{4}{(1+x)^5}, \quad x > 0$$

- (iii) Critical values for the Kolmogorov-Smirnov test are:

Level of Significance	0.10	0.05	0.025	0.01
Critical Value	$\frac{1.22}{\sqrt{n}}$	$\frac{1.36}{\sqrt{n}}$	$\frac{1.48}{\sqrt{n}}$	$\frac{1.63}{\sqrt{n}}$

Determine the result of the test.

- (A) Do not reject  $H_0$  at the 0.10 significance level.
- (B) Reject  $H_0$  at the 0.10 significance level, but not at the 0.05 significance level.
- (C) Reject  $H_0$  at the 0.05 significance level, but not at the 0.025 significance level.
- (D) Reject  $H_0$  at the 0.025 significance level, but not at the 0.01 significance level.
- (E) Reject  $H_0$  at the 0.01 significance level.

**173.** You are given:

- (i) The number of claims follows a negative binomial distribution with parameters  $r$  and  $\beta = 3$ .
- (ii) Claim severity has the following distribution:

Claim Size	Probability
1	0.4
10	0.4
100	0.2

- (iii) The number of claims is independent of the severity of claims.

Calculate the expected number of claims needed for aggregate losses to be within 10% of expected aggregate losses with 95% probability.

- (A) Less than 1200
- (B) At least 1200, but less than 1600
- (C) At least 1600, but less than 2000
- (D) At least 2000, but less than 2400
- (E) At least 2400



**174.** You are given:

- (i) A mortality study covers  $n$  lives.
- (ii) None were censored and no two deaths occurred at the same time.
- (iii)  $t_k$  = time of the  $k$ th death
- (iv) A Nelson-Aalen estimate of the cumulative hazard rate function is  $\hat{H}(t_2) = \frac{39}{380}$ .

Calculate the Kaplan-Meier product-limit estimate of the survival function at time  $t_9$ .

- (A) Less than 0.56
- (B) At least 0.56, but less than 0.58
- (C) At least 0.58, but less than 0.60
- (D) At least 0.60, but less than 0.62
- (E) At least 0.62

**175.** Three observed values of the random variable  $X$  are:

$$1 \quad 1 \quad 4$$

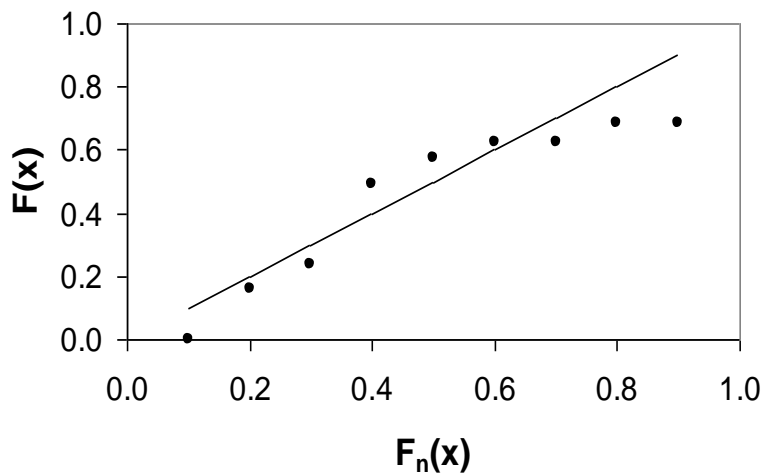
You estimate the third central moment of  $X$  using the estimator:

$$g(X_1, X_2, X_3) = \frac{1}{3} \sum_{i=1}^3 (X_i - \bar{X})^3$$

Calculate the bootstrap estimate of the mean-squared error of  $g$ .

- (A) Less than 3.0
- (B) At least 3.0, but less than 3.5
- (C) At least 3.5, but less than 4.0
- (D) At least 4.0, but less than 4.5
- (E) At least 4.5

**176.** You are given the following  $p$ - $p$  plot:



The plot is based on the sample:

1    2    3    15    30    50    51    99    100

Determine the fitted model underlying the  $p$ - $p$  plot.

- (A)  $F(x) = 1 - x^{-0.25}$ ,  $x \geq 1$
- (B)  $F(x) = x / (1 + x)$ ,  $x \geq 0$
- (C) Uniform on  $[1, 100]$
- (D) Exponential with mean 10
- (E) Normal with mean 40 and standard deviation 40

**177.** You are given:

- (i) Claims are conditionally independent and identically Poisson distributed with mean  $\Theta$ .
- (ii) The prior distribution function of  $\Theta$  is:

$$F(\theta) = 1 - \left( \frac{1}{1+\theta} \right)^{2.6}, \quad \theta > 0$$

Five claims are observed.

Calculate the Bühlmann credibility factor.

- (A) Less than 0.6
- (B) At least 0.6, but less than 0.7
- (C) At least 0.7, but less than 0.8
- (D) At least 0.8, but less than 0.9
- (E) At least 0.9

**178.** DELETED

**179.** The time to an accident follows an exponential distribution. A random sample of size two has a mean time of 6.

Let  $Y$  denote the mean of a new sample of size two.

Calculate the maximum likelihood estimate of  $\Pr(Y > 10)$ .

- (A) 0.04
- (B) 0.07
- (C) 0.11
- (D) 0.15
- (E) 0.19

**180.** The time to an accident follows an exponential distribution. A random sample of size two has a sample mean time of 6.

Let  $Y$  denote the mean of a new sample of size two.

Calculate the delta method approximation of the variance of the maximum likelihood estimator of  $F_Y(10)$ .

- (A) 0.08
- (B) 0.12
- (C) 0.16
- (D) 0.19
- (E) 0.22

**181.** You are given:

- (i) The number of claims in a year for a selected risk follows a Poisson distribution with mean  $\lambda$ .
- (ii) The severity of claims for the selected risk follows an exponential distribution with mean  $\theta$ .
- (iii) The number of claims is independent of the severity of claims.
- (iv) The prior distribution of  $\lambda$  is exponential with mean 1.
- (v) The prior distribution of  $\theta$  is Poisson with mean 1.
- (vi) A priori,  $\lambda$  and  $\theta$  are independent.

Using Bühlmann's credibility for aggregate losses, calculate  $k$ .

- (A) 1
- (B) 4/3
- (C) 2
- (D) 3
- (E) 4

**182.** A company insures 100 people age 65. The annual probability of death for each person is 0.03. The deaths are independent.

Use the inversion method to simulate the number of deaths in a year for three years using the uniform (0,1) random numbers 0.20, 0.03, and 0.09.

Calculate the average of the simulated values.

- (A) 1/3
- (B) 1
- (C) 5/3
- (D) 7/3
- (E) 3

**183.** DELETED

**184.** You are given:

- (i) Annual claim frequencies follow a Poisson distribution with mean  $\lambda$ .
- (ii) The prior distribution of  $\lambda$  has probability density function:

$$\pi(\lambda) = (0.4)\frac{1}{6}e^{-\lambda/6} + (0.6)\frac{1}{12}e^{-\lambda/12}, \quad \lambda > 0$$

Ten claims are observed for an insured in Year 1.

Calculate the Bayesian expected number of claims for the insured in Year 2.

- (A) 9.6
- (B) 9.7
- (C) 9.8
- (D) 9.9
- (E) 10.0

**185.** Twelve policyholders were monitored from the starting date of the policy to the time of first claim. The observed data are as follows:

Time of First Claim	1	2	3	4	5	6	7
Number of Claims	2	1	2	2	1	2	2

Using the Nelson-Aalen estimator, calculate the 95% linear confidence interval for the cumulative hazard rate function  $H(4.5)$ .

- (A) (0.189, 1.361)
- (B) (0.206, 1.545)
- (C) (0.248, 1.402)
- (D) (0.283, 1.266)
- (E) (0.314, 1.437)

**186.** For the random variable  $X$ , you are given:

- (i)  $E[X] = \theta, \theta > 0$
- (ii)  $\text{Var}(X) = \frac{\theta^2}{25}$
- (iii)  $\hat{\theta} = \frac{k}{k+1} X, k > 0$
- (iv)  $\text{MSE}_{\hat{\theta}}(\theta) = 2[\text{bias}_{\hat{\theta}}(\theta)]^2$

Calculate  $k$ .

- (A) 0.2
- (B) 0.5
- (C) 2
- (D) 5
- (E) 25

**187.** You are given:

- (i) The annual number of claims on a given policy has a geometric distribution with parameter  $\beta$ .
- (ii) The prior distribution of  $\beta$  has the Pareto density function

$$\pi(\beta) = \frac{\alpha}{(\beta+1)^{\alpha+1}}, \quad 0 < \beta < \infty$$

Where  $\alpha$  is a known constant greater than 2.

A randomly selected policy had  $x$  claims in Year 1.

Determine the Bühlmann credibility estimate of the number of claims for the selected policy in Year 2.

- (A)  $\frac{1}{\alpha-1}$
- (B)  $\frac{\alpha-1}{\alpha}x + \frac{1}{\alpha(\alpha-1)}$
- (C)  $x$
- (D)  $\frac{x+1}{\alpha}$
- (E)  $\frac{x+1}{\alpha-1}$

**188.** DELETED

**189.** Which of the following statements is true?

- (A) For a null hypothesis that the population follows a particular distribution, using sample data to estimate the parameters of the distribution tends to decrease the probability of a Type II error.
- (B) The Kolmogorov-Smirnov test can be used on individual or grouped data.
- (C) (Removed as this statement referred to the Anderson-Darling test)
- (D) For a given number of cells, the critical value for the chi-square goodness-of-fit test becomes larger with increased sample size.
- (E) None of (A), (B), or (D) is true.

**190.** For a particular policy, the conditional probability of the annual number of claims given  $\Theta = \theta$ , and the probability distribution of  $\Theta$  are as follows:

Number of claims	0	1	2
Probability	$2\theta$	$\theta$	$1-3\theta$

$\theta$	0.05	0.30
Probability	0.80	0.20

Two claims are observed in Year 1.

Calculate the Bühlmann credibility estimate of the number of claims in Year 2.

- (A) Less than 1.68
- (B) At least 1.68, but less than 1.70
- (C) At least 1.70, but less than 1.72
- (D) At least 1.72, but less than 1.74
- (E) At least 1.74



**191.** You are given:

- (i) The annual number of claims for a policyholder follows a Poisson distribution with mean  $\Lambda$ .
- (ii) The prior distribution of  $\Lambda$  is gamma with probability density function:

$$f(\lambda) = \frac{(2\lambda)^5 e^{-2\lambda}}{24\lambda}, \quad \lambda > 0$$

An insured is selected at random and observed to have  $x_1 = 5$  claims during Year 1 and  $x_2 = 3$  claims during Year 2.

Calculate  $E[\Lambda | x_1 = 5, x_2 = 3]$ .

- (A) 3.00
- (B) 3.25
- (C) 3.50
- (D) 3.75
- (E) 4.00

**192.** You are given the kernel:

$$k_y(x) = \begin{cases} \frac{2}{\pi} \sqrt{1 - (x - y)^2}, & y - 1 \leq x \leq y + 1 \\ 0, & \text{otherwise} \end{cases}$$

You are also given the following random sample:

1 3 3 5

Determine which of the following graphs shows the shape of the kernel density estimator.

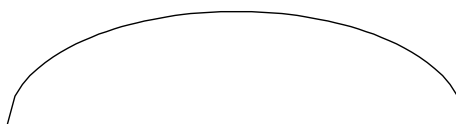
(A)



(B)



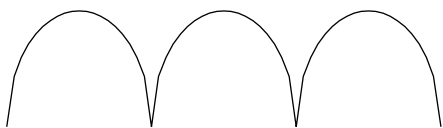
(C)



(D)



(E)



**193.** The following claim data were generated from a Pareto distribution:

130 20 350 218 1822

Using the method of moments to estimate the parameters of a Pareto distribution, calculate the limited expected value at 500.

- (A) Less than 250
- (B) At least 250, but less than 280
- (C) At least 280, but less than 310
- (D) At least 310, but less than 340
- (E) At least 340

**194.** You are given:

	Group	Year 1	Year 2	Year 3	Total
Total Claims	1		10,000	15,000	25,000
Number in Group			50	60	110
Average			200	250	227.27
Total Claims	2	16,000	18,000		34,000
Number in Group		100	90		190
Average		160	200		178.95
Total Claims					59,000
Number in Group					300
Average					196.67

You are also given  $\hat{a} = 651.03$ .

Calculate the nonparametric empirical Bayes credibility factor for Group 1.

- (A) 0.48
- (B) 0.50
- (C) 0.52
- (D) 0.54
- (E) 0.56

**195.** You are given the following information regarding claim sizes for 100 claims:

Claim Size	Number of Claims
0 - 1,000	16
1,000 - 3,000	22
3,000 - 5,000	25
5,000 - 10,000	18
10,000 - 25,000	10
25,000 - 50,000	5
50,000 - 100,000	3
over 100,000	1

Using the ogive, calculate the estimate of the probability that a randomly chosen claim is between 2,000 and 6,000.

- (A) 0.36
- (B) 0.40
- (C) 0.45
- (D) 0.47
- (E) 0.50

**196.** You are given the following 20 bodily injury losses (before the deductible is applied):

Loss	Number of Losses	Deductible	Policy Limit
750	3	200	$\infty$
200	3	0	10,000
300	4	0	20,000
>10,000	6	0	10,000
400	4	300	$\infty$

Past experience indicates that these losses follow a Pareto distribution with parameters  $\alpha$  and  $\theta = 10,000$ .

Calculate the maximum likelihood estimate of  $\alpha$ .

- (A) Less than 2.0
- (B) At least 2.0, but less than 3.0
- (C) At least 3.0, but less than 4.0
- (D) At least 4.0, but less than 5.0
- (E) At least 5.0

**197.** You are given:

- (i) During a 2-year period, 100 policies had the following claims experience:

Total Claims in Years 1 and 2	Number of Policies
0	50
1	30
2	15
3	4
4	1

- (ii) The number of claims per year follows a Poisson distribution.  
(iii) Each policyholder was insured for the entire 2-year period.

A randomly selected policyholder had one claim over the 2-year period.

Using semiparametric empirical Bayes estimation, calculate the Bühlmann estimate for the number of claims in Year 3 for the same policyholder.

- (A) 0.380  
(B) 0.387  
(C) 0.393  
(D) 0.403  
(E) 0.443

**198.** DELETED

**199.** Personal auto property damage claims in a certain region are known to follow the Weibull distribution:

$$F(x) = 1 - \exp\left[-\left(\frac{x}{\theta}\right)^{0.2}\right], \quad x > 0$$

A sample of four claims is:

130    240    300    540

The values of two additional claims are known to exceed 1000.

Calculate the maximum likelihood estimate of  $\theta$ .

- (A) Less than 300
- (B) At least 300, but less than 1200
- (C) At least 1200, but less than 2100
- (D) At least 2100, but less than 3000
- (E) At least 3000

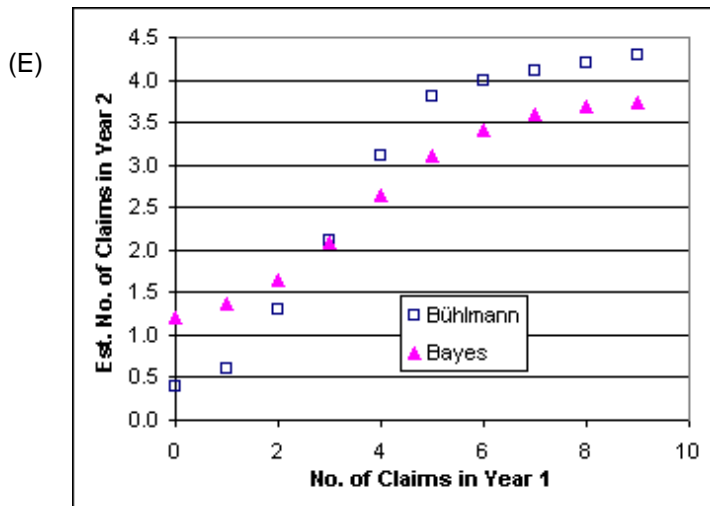
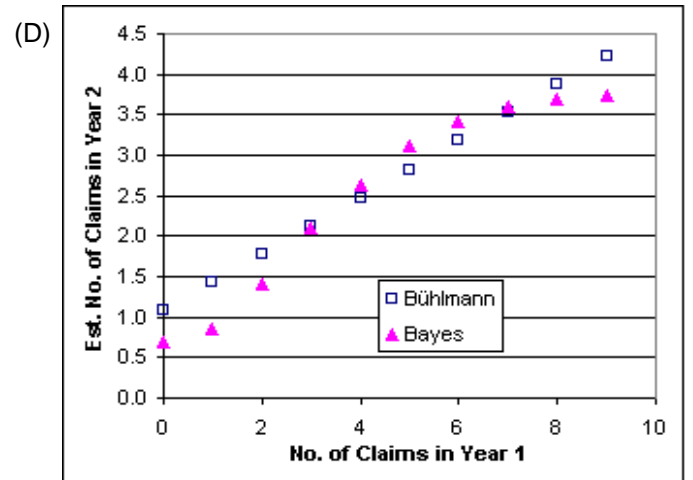
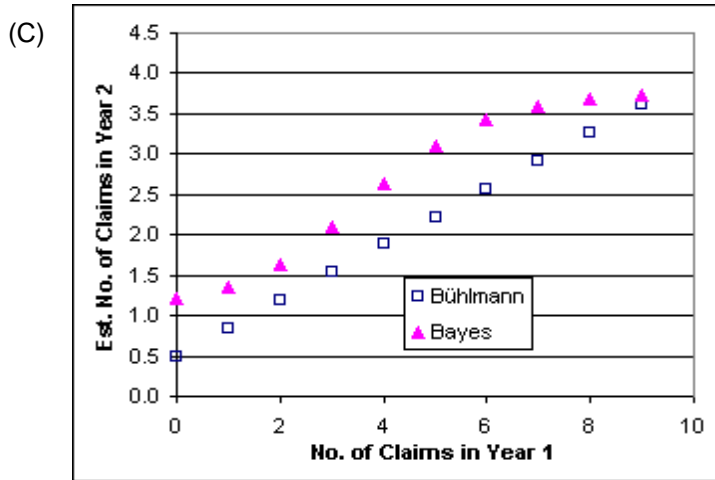
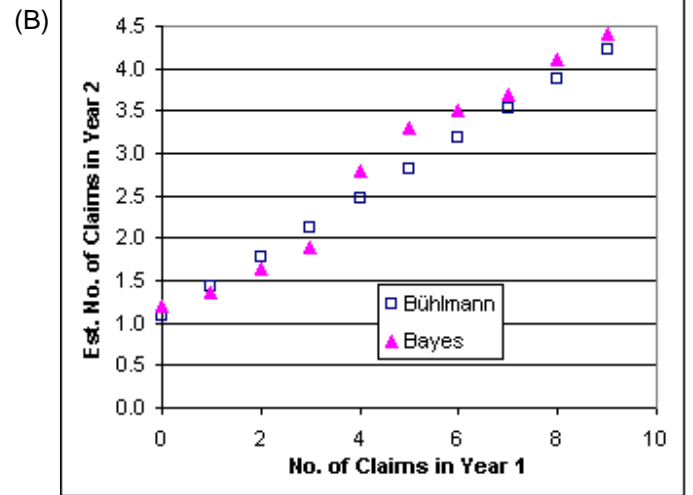
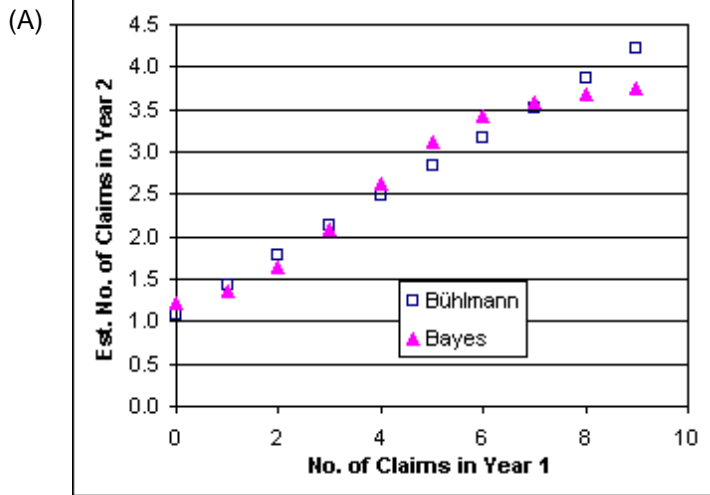
**200.** For five types of risks, you are given:

- (i) The expected number of claims in a year for these risks ranges from 1.0 to 4.0.
- (ii) The number of claims follows a Poisson distribution for each risk.

During Year 1,  $n$  claims are observed for a randomly selected risk.

For the same risk, both Bayes and Bühlmann credibility estimates of the number of claims in Year 2 are calculated for  $n = 0, 1, 2, \dots, 9$ .

Which graph represents these estimates?





- 201.** You test the hypothesis that a given set of data comes from a known distribution with distribution function  $F(x)$ . The following data were collected:

Interval	$F(x_i)$	Number of Observations
$x < 2$	0.035	5
$2 \leq x < 5$	0.130	42
$5 \leq x < 7$	0.630	137
$7 \leq x < 8$	0.830	66
$8 \leq x$	1.000	50
Total		300

where  $x_i$  is the upper endpoint of each interval.

You test the hypothesis using the chi-square goodness-of-fit test.

Determine the result of the test.

- (A) The hypothesis is not rejected at the 0.10 significance level.
- (B) The hypothesis is rejected at the 0.10 significance level, but is not rejected at the 0.05 significance level.
- (C) The hypothesis is rejected at the 0.05 significance level, but is not rejected at the 0.025 significance level.
- (D) The hypothesis is rejected at the 0.025 significance level, but is not rejected at the 0.01 significance level.
- (E) The hypothesis is rejected at the 0.01 significance level.

**202.** Unlimited claim severities for a warranty product follow the lognormal distribution with parameters  $\mu = 5.6$  and  $\sigma = 0.75$ .

You use simulation to generate severities.

The following are six uniform (0, 1) random numbers:

0.6179    0.4602    0.9452    0.0808    0.7881    0.4207

Using these numbers and the inversion method, calculate the average payment per claim for a contract with a policy limit of 400.

- (A) Less than 300
- (B) At least 300, but less than 320
- (C) At least 320, but less than 340
- (D) At least 340, but less than 360
- (E) At least 360

**203.** You are given:

- (i) The annual number of claims on a given policy has the geometric distribution with parameter  $\beta$ .
- (ii) One-third of the policies have  $\beta = 2$ , and the remaining two-thirds have  $\beta = 5$ .

A randomly selected policy had two claims in Year 1.

Calculate the Bayesian expected number of claims for the selected policy in Year 2.

- (A) 3.4
- (B) 3.6
- (C) 3.8
- (D) 4.0
- (E) 4.2

- 204.** The length of time, in years, that a person will remember an actuarial statistic is modeled by an exponential distribution with mean  $1/Y$ . In a certain population,  $Y$  has a gamma distribution with  $\alpha = \theta = 2$ .

Calculate the probability that a person drawn at random from this population will remember an actuarial statistic less than  $1/2$  year.

- (A) 0.125
- (B) 0.250
- (C) 0.500
- (D) 0.750
- (E) 0.875

- 205.** In a CCRC, residents start each month in one of the following three states: Independent Living (State #1), Temporarily in a Health Center (State #2) or Permanently in a Health Center (State #3). Transitions between states occur at the end of the month.

If a resident receives physical therapy, the number of sessions that the resident receives in a month has a geometric distribution with a mean that depends on the state in which the resident begins the month. The numbers of sessions received are independent. The number in each state at the beginning of a given month, the probability of needing physical therapy in the month, and the mean number of sessions received for residents receiving therapy are displayed in the following table:

State #	Number in state	Probability of needing therapy	Mean number of visits
1	400	0.2	2
2	300	0.5	15
3	200	0.3	9

Using the normal approximation for the aggregate distribution, calculate the probability that more than 3000 physical therapy sessions will be required for the given month.

- (A) 0.21
- (B) 0.27
- (C) 0.34
- (D) 0.42
- (E) 0.50

- 206.** In a given week, the number of projects that require you to work overtime has a geometric distribution with  $\beta = 2$ . For each project, the distribution of the number of overtime hours in the week is the following:

$x$	$f(x)$
5	0.2
10	0.3
20	0.5

The number of projects and number of overtime hours are independent. You will get paid for overtime hours in excess of 15 hours in the week.

Calculate the expected number of overtime hours for which you will get paid in the week.

- (A) 18.5
- (B) 18.8
- (C) 22.1
- (D) 26.2
- (E) 28.0

**207.** For an insurance:

- (i) Losses have density function

$$f(x) = \begin{cases} 0.02x, & 0 < x < 10 \\ 0, & \text{elsewhere} \end{cases}$$

- (ii) The insurance has an ordinary deductible of 4 per loss.  
(iii)  $Y^P$  is the claim payment per payment random variable.

Calculate  $E[Y^P]$ .

- (A) 2.9  
(B) 3.0  
(C) 3.2  
(D) 3.3  
(E) 3.4

**208.** DELETED

**209.** In 2005 a risk has a two-parameter Pareto distribution with  $\alpha = 2$  and  $\theta = 3000$ . In 2006 losses inflate by 20%.

An insurance on the risk has a deductible of 600 in each year.  $P_i$ , the premium in year  $i$ , equals 1.2 times the expected claims.

The risk is reinsured with a deductible that stays the same in each year.  $R_i$ , the reinsurance premium in year  $i$ , equals 1.1 times the expected reinsured claims.

$$\frac{R_{2005}}{P_{2005}} = 0.55$$

Calculate  $\frac{R_{2006}}{P_{2006}}$ .

- (A) 0.46
- (B) 0.52
- (C) 0.55
- (D) 0.58
- (E) 0.66

**210.** Each life within a group medical expense policy has loss amounts which follow a compound Poisson process with  $\lambda = 0.16$ . Given a loss, the probability that it is for Disease 1 is  $1/16$ .

Loss amount distributions have the following parameters:

	Mean per loss	Standard Deviation per loss
Disease 1	5	50
Other diseases	10	20

Premiums for a group of 100 independent lives are set at a level such that the probability (using the normal approximation to the distribution for aggregate losses) that aggregate losses for the group will exceed aggregate premiums for the group is 0.24.

A vaccine that will eliminate Disease 1 and costs 0.15 per person has been discovered.

Define:

A = the aggregate premium assuming that no one obtains the vaccine, and

B = the aggregate premium assuming that everyone obtains the vaccine and the cost of the vaccine is a covered loss.

Calculate A/B.

- (A) 0.94
- (B) 0.97
- (C) 1.00
- (D) 1.03
- (E) 1.06



**211.** An actuary for a medical device manufacturer initially models the failure time for a particular device with an exponential distribution with mean 4 years.

This distribution is replaced with a spliced model whose density function:

- (i) is uniform over  $[0, 3]$
- (ii) is proportional to the initial modeled density function after 3 years
- (iii) is continuous

Calculate the probability of failure in the first 3 years under the revised distribution.

- (A) 0.43
- (B) 0.45
- (C) 0.47
- (D) 0.49
- (E) 0.51

**212.** For an insurance:

- (i) The number of losses per year has a Poisson distribution with  $\lambda = 10$ .
- (ii) Loss amounts are uniformly distributed on  $(0, 10)$ .
- (iii) Loss amounts and the number of losses are mutually independent.
- (iv) There is an ordinary deductible of 4 per loss.

Calculate the variance of aggregate payments in a year.

- (A) 36
- (B) 48
- (C) 72
- (D) 96
- (E) 120

**213.** For an insurance portfolio:

- (i) The number of claims has the probability distribution

$n$	$p_n$
0	0.1
1	0.4
2	0.3
3	0.2

- (ii) Each claim amount has a Poisson distribution with mean 3; and  
(iii) The number of claims and claim amounts are mutually independent.

Calculate the variance of aggregate claims.

- (A) 4.8  
(B) 6.4  
(C) 8.0  
(D) 10.2  
(E) 12.4

**214.** A portfolio of policies has produced the following claims:

100 100 100 200 300 300 300 400 500 600

Calculate the Kaplan-Meier product-limit estimate of  $H(300)$ , where  $H(x)$  denotes the cumulative hazard rate function.

- (A) Less than 0.50  
(B) At least 0.50, but less than 0.75  
(C) At least 0.75, but less than 1.00  
(D) At least 1.00, but less than 1.25  
(E) At least 1.25

**215.** You are given:

- (i) The conditional distribution of the number of claims per policyholder is Poisson with mean  $\lambda$ .
- (ii) The variable  $\lambda$  has a gamma distribution with parameters  $\alpha$  and  $\theta$ .
- (iii) For policyholders with 1 claim in Year 1, the credibility estimate for the number of claims in Year 2 is 0.15.
- (iv) For policyholders with an average of 2 claims per year in Year 1 and Year 2, the credibility estimate for the number of claims in Year 3 is 0.20.

Calculate  $\theta$ .

- (A) Less than 0.02
- (B) At least 0.02, but less than 0.03
- (C) At least 0.03, but less than 0.04
- (D) At least 0.04, but less than 0.05
- (E) At least 0.05

**216.** A random sample of claims has been drawn from a Burr distribution with known parameter  $\alpha = 1$  and unknown parameters  $\theta$  and  $\gamma$ . You are given:

- (i) 75% of the claim amounts in the sample exceed 100.
- (ii) 25% of the claim amounts in the sample exceed 500.

Estimate  $\theta$  by percentile matching.

- (A) Less than 190
- (B) At least 190, but less than 200
- (C) At least 200, but less than 210
- (D) At least 210, but less than 220
- (E) At least 220

**217.** For a portfolio of policies, you are given:

(i) There is no deductible and the policy limit varies by policy.

(ii) A sample of ten claims is:

350 350 500 500 500+ 1000 1000+ 1000+ 1200 1500

where the symbol + indicates that the loss exceeds the policy limit.

(iii)  $\hat{S}_1(1250)$  is the Kaplan-Meier product-limit estimate of  $S(1250)$ .

(iv)  $\hat{S}_2(1250)$  is the maximum likelihood estimate of  $S(1250)$  under the assumption that the losses follow an exponential distribution.

Calculate the absolute difference between  $\hat{S}_1(1250)$  and  $\hat{S}_2(1250)$ .

- (A) 0.00
- (B) 0.03
- (C) 0.05
- (D) 0.07
- (E) 0.09

**218.** The random variable  $X$  has survival function:

$$S_X(x) = \frac{\theta^4}{(\theta^2 + x^2)^2}$$

Two values of  $X$  are observed to be 2 and 4. One other value exceeds 4.

Calculate the maximum likelihood estimate of  $\theta$ .

- (A) Less than 4.0
- (B) At least 4.0, but less than 4.5
- (C) At least 4.5, but less than 5.0
- (D) At least 5.0, but less than 5.5
- (E) At least 5.5

**219.** For a portfolio of policies, you are given:

- (i) The annual claim amount on a policy has probability density function:

$$f(x|\theta) = \frac{2x}{\theta^2}, \quad 0 < x < \theta$$

- (ii) The prior distribution of  $\theta$  has density function:

$$\pi(\theta) = 4\theta^3, \quad 0 < \theta < 1$$

- (iii) A randomly selected policy had claim amount 0.1 in Year 1.

Calculate the Bühlmann credibility estimate of the claim amount for the selected policy in Year 2.

- (A) 0.43
- (B) 0.45
- (C) 0.50
- (D) 0.53
- (E) 0.56

**220.** Total losses for a group of insured motorcyclists are simulated using the aggregate loss model and the inversion method.

The number of claims has a Poisson distribution with  $\lambda = 4$ . The amount of each claim has an exponential distribution with mean 1000.

The inversion method is used to simulate the number of claims and the claim amounts. The uniform (0,1) random number 0.13 is used to simulate the number of claims. The uniform (0,1) random numbers 0.05, 0.95, and 0.10 are used, in order, as needed, to simulate the claim amounts.

Calculate the simulated total losses.

- (A) 0
- (B) 51
- (C) 2996
- (D) 3047
- (E) 3152

**221.** You are given:

(i) The sample:

1    2    3    3    3    3    3    3    3    3

(ii)  $\hat{F}_1(x)$  is the kernel density estimator of the distribution function using a uniform kernel with bandwidth 1.

(iii)  $\hat{F}_2(x)$  is the kernel density estimator of the distribution function using a triangular kernel with bandwidth 1.

Determine which of the following intervals has  $\hat{F}_1(x) = \hat{F}_2(x)$  for all  $x$  in the interval.

(A)  $0 < x < 1$

(B)  $1 < x < 2$

(C)  $2 < x < 3$

(D)  $3 < x < 4$

(E) None of (A), (B), (C) or (D)

- 222.** 1000 workers insured under a workers compensation policy were observed for one year. The number of work days missed is given below:

Number of Days of Work Missed	Number of Workers
0	818
1	153
2	25
3 or more	4
Total	1000
Total Number of Days Missed	230

The chi-square goodness-of-fit test is used to test the hypothesis that the number of work days missed follows a Poisson distribution where:

- (i) The Poisson parameter is estimated by the average number of work days missed.
- (ii) Any interval in which the expected number is less than one is combined with the previous interval.

Determine the results of the test.

- (A) The hypothesis is not rejected at the 0.10 significance level.
- (B) The hypothesis is rejected at the 0.10 significance level, but is not rejected at the 0.05 significance level.
- (C) The hypothesis is rejected at the 0.05 significance level, but is not rejected at the 0.025 significance level.
- (D) The hypothesis is rejected at the 0.025 significance level, but is not rejected at the 0.01 significance level.
- (E) The hypothesis is rejected at the 0.01 significance level.



**223.** You are given the following data:

	Year 1	Year 2
Total Losses	12,000	14,000
Number of Policyholders	25	30

The estimate of the variance of the hypothetical means is 254.

Calculate the credibility factor for Year 3 using the nonparametric empirical Bayes method.

- (A) Less than 0.73
- (B) At least 0.73, but less than 0.78
- (C) At least 0.78, but less than 0.83
- (D) At least 0.83, but less than 0.88
- (E) At least 0.88

**224.** DELETED

**225.** You are given:

- (i) Fifty claims have been observed from a lognormal distribution with unknown parameters  $\mu$  and  $\sigma$ .
- (ii) The maximum likelihood estimates are  $\hat{\mu} = 6.84$  and  $\hat{\sigma} = 1.49$ .
- (iii) The covariance matrix of  $\hat{\mu}$  and  $\hat{\sigma}$  is:

$$\begin{bmatrix} 0.0444 & 0 \\ 0 & 0.0222 \end{bmatrix}$$

- (iv) The partial derivatives of the lognormal cumulative distribution function are:

$$\frac{\partial F}{\partial \mu} = \frac{-\phi(z)}{\sigma} \quad \text{and} \quad \frac{\partial F}{\partial \sigma} = \frac{-z\phi(z)}{\sigma}$$

- (v) An approximate 95% confidence interval for the probability that the next claim will be less than or equal to 5000 is  $[L, U]$

Calculate  $L$ .

- (A) 0.73
- (B) 0.76
- (C) 0.79
- (D) 0.82
- (E) 0.85

- 226.** For a particular policy, the conditional probability of the annual number of claims given  $\Theta = \theta$ , and the probability distribution of  $\Theta$  are as follows:

Number of Claims	0	1	2
Probability	$2\theta$	$\theta$	$1-3\theta$

$\theta$	0.10	0.30
Probability	0.80	0.20

One claim was observed in Year 1.

Calculate the Bayesian estimate of the expected number of claims for Year 2.

- (A) Less than 1.1
- (B) At least 1.1, but less than 1.2
- (C) At least 1.2, but less than 1.3
- (D) At least 1.3, but less than 1.4
- (E) At least 1.4

- 227.** You simulate observations from a specific distribution  $F(x)$ , such that the number of simulations  $N$  is sufficiently large to be at least 95 percent confident of estimating  $F(1500)$  correctly within 1 percent.

Let  $P$  represent the number of simulated values less than 1500.

Determine which of the following could be values of  $N$  and  $P$ .

- (A)  $N = 2000$        $P = 1890$
- (B)  $N = 3000$        $P = 2500$
- (C)  $N = 3500$        $P = 3100$
- (D)  $N = 4000$        $P = 3630$
- (E)  $N = 4500$        $P = 4020$

**228.** For a survival study, you are given:

- (i) Deaths occurred at times  $y_1 < y_2 < \dots < y_9$ .
- (ii) The Nelson-Aalen estimates of the cumulative hazard function at  $y_3$  and  $y_4$  are:

$$\hat{H}(y_3) = 0.4128 \text{ and } \hat{H}(y_4) = 0.5691$$

- (iii) The estimated variances of the estimates in (ii) are:

$$\text{Var}[\hat{H}(y_3)] = 0.009565 \text{ and } \text{Var}[\hat{H}(y_4)] = 0.014448$$

Calculate the number of deaths at  $y_4$ .

- (A) 2
- (B) 3
- (C) 4
- (D) 5
- (E) 6

**229.** A random sample of size  $n$  is drawn from a distribution with probability density function:

$$f(x) = \frac{\theta}{(\theta + x)^2}, \quad 0 < x < \infty, \theta > 0$$

Calculate the asymptotic variance of the maximum likelihood estimator of  $\theta$ .

- (A)  $\frac{3\theta^2}{n}$
- (B)  $\frac{1}{3n\theta^2}$
- (C)  $\frac{3}{n\theta^2}$
- (D)  $\frac{n}{3\theta^2}$

(E)  $\frac{1}{3\theta^2}$

**230.** For a portfolio of independent risks, the number of claims for each risk in a year follows a Poisson distribution with means given in the following table:

Class	Mean Number of Claims per Risk	Number of Risks
1	1	900
2	10	90
3	20	10

You observe  $x$  claims in Year 1 for a randomly selected risk.

The Bühlmann credibility estimate of the number of claims for the same risk in Year 2 is 11.983.

Calculate  $x$ .

- (A) 13
- (B) 14
- (C) 15
- (D) 16
- (E) 17

**231.** A survival study gave (0.283, 1.267) as the symmetric linear 95% confidence interval for  $H(5)$ , where  $H(x)$  denotes the cumulative hazard rate function.

Using the delta method, calculate the symmetric linear 95% confidence interval for  $S(5)$ .

- (A) (0.23, 0.69)
- (B) (0.26, 0.72)
- (C) (0.28, 0.75)
- (D) (0.31, 0.73)
- (E) (0.32, 0.80)



**232.** You are given:

- (i) Losses on a certain warranty product in Year  $i$  follow a lognormal distribution with parameters  $\mu_i$  and  $\sigma_i$ .
- (ii)  $\sigma_i = \sigma$ , for  $i = 1, 2, 3, \dots$
- (iii) The parameters  $\mu_i$  vary in such a way that there is an annual inflation rate of 10% for losses.
- (iv) The following is a sample of seven losses:

Year 1:	20	40	50	
Year 2:	30	40	90	120

Using trended losses, calculate the method of moments estimate of  $\mu_3$ .

- (A) 3.87
- (B) 4.00
- (C) 30.00
- (D) 55.71
- (E) 63.01

**233.** You are given:

- (i) A region is comprised of three territories. Claims experience for Year 1 is as follows:

Territory	Number of Insureds	Number of Claims
X	10	4
Y	20	5
Z	30	3

- (ii) The number of claims for each insured each year has a Poisson distribution.  
(iii) Each insured in a territory has the same expected claim frequency.  
(iv) The number of insureds is constant over time for each territory.

Calculate the Bühlmann-Straub empirical Bayes estimate of the credibility factor  $Z$  for Territory A.

- (A) Less than 0.4  
(B) At least 0.4, but less than 0.5  
(C) At least 0.5, but less than 0.6  
(D) At least 0.6, but less than 0.7  
(E) At least 0.7

**234.** DELETED



**235.** You are given:

- (i) A random sample of losses from a Weibull distribution is:

595 700 789 799 1109

- (ii) At the maximum likelihood estimates of  $\theta$  and  $\tau$ ,  $\sum \ln[f(x_i)] = -33.05$ .

- (iii) When  $\tau = 2$ , the maximum likelihood estimate of  $\theta$  is 816.7.

- (iv) You use the likelihood ratio test to test the hypothesis

$$H_0 : \tau = 2 \text{ vs. } H_1 : \tau \neq 2$$

Determine the result of the test.

- (A) Do not reject the null hypotheses at the 0.10 level of significance.
- (B) Reject the null hypothesis at the 0.10 level of significance, but not at the 0.05 level of significance.
- (C) Reject the null hypothesis at the 0.05 level of significance, but not at the 0.025 level of significance.
- (D) Reject the null hypotheses at the 0.025 level of significance, but not at the 0.01 level of significance.
- (E) Reject the null hypothesis at the 0.01 level of significance.

**236.** For each policyholder, losses  $X_1, \dots, X_n$ , conditional on  $\Theta$ , are independently and identically distributed with mean,

$$\mu(\theta) = E[X_j | \Theta = \theta], \quad j = 1, 2, \dots, n$$

and variance,

$$v(\theta) = \text{Var}[X_j | \Theta = \theta], \quad j = 1, 2, \dots, n.$$

You are given:

- (i) The Bühlmann credibility assigned for estimating  $X_5$  based on  $X_1, \dots, X_4$  is  $Z = 0.4$ .
- (ii) The expected value of the process variance is known to be 8.

Calculate  $\text{Cov}(X_i, X_j)$ ,  $i \neq j$ .

- (A) Less than  $-0.5$
- (B) At least  $-0.5$ , but less than  $0.5$
- (C) At least  $0.5$ , but less than  $1.5$
- (D) At least  $1.5$ , but less than  $2.5$
- (E) At least  $2.5$

**237.** Losses for a warranty product follow the lognormal distribution with underlying normal mean and standard deviation of 5.6 and 0.75 respectively.

The following are four uniform (0,1) random numbers:

0.6217   0.9941   0.8686   0.0485

Using these numbers and the inversion method, calculate the average payment per loss for a contract with a deductible of 100.

- (A) Less than 630
- (B) At least 630, but less than 680
- (C) At least 680, but less than 730
- (D) At least 730, but less than 780
- (E) At least 780

**238.** The random variable  $X$  has the exponential distribution with mean  $\theta$ .

Calculate the mean-squared error of  $X^2$  as an estimator of  $\theta^2$ .

- (A)  $20\theta^4$
- (B)  $21\theta^4$
- (C)  $22\theta^4$
- (D)  $23\theta^4$
- (E)  $24\theta^4$

**239.** You are given the following data for the number of claims during a one-year period:

Number of Claims	Number of Policies
0	157
1	66
2	19
3	4
4	2
5+	0
Total	248

A geometric distribution is fitted to the data using maximum likelihood estimation.  
Let  $P$  = probability of zero claims using the fitted geometric model.

A Poisson distribution is fitted to the data using the method of moments.  
Let  $Q$  = probability of zero claims using the fitted Poisson model.

Calculate  $|P - Q|$ .

- (A) 0.00
- (B) 0.03
- (C) 0.06
- (D) 0.09
- (E) 0.12

**240.** For a group of auto policyholders, you are given:

- (i) The number of claims for each policyholder has a conditional Poisson distribution.
- (ii) During Year 1, the following data are observed for 8000 policyholders:

Number of Claims	Number of Policyholders
0	5000
1	2100
2	750
3	100
4	50
5+	0

A randomly selected policyholder had one claim in Year 1.

Calculate the semiparametric empirical Bayes estimate of the number of claims in Year 2 for the same policyholder.

- (A) Less than 0.15
- (B) At least 0.15, but less than 0.30
- (C) At least 0.30, but less than 0.45
- (D) At least 0.45, but less than 0.60
- (E) At least 0.60

**241.** You are given:

- (i) The following are observed claim amounts:

400    1000    1600    3000    5000    5400    6200

- (ii) An exponential distribution with  $\theta = 3300$  is hypothesized for the data.

- (iii) The goodness of fit is to be assessed by a  $p$ - $p$  plot and a  $D(x)$  plot.

Let  $(s, t)$  be the coordinates of the  $p$ - $p$  plot for a claim amount of 3000.

Calculate  $(s - t) - D(3000)$

- (A) -0.12  
(B) -0.07  
(C) 0.00  
(D) 0.07  
(E) 0.12

**242.** You are given:

- (i) In a portfolio of risks, each policyholder can have at most two claims per year.
- (ii) For each year, the distribution of the number of claims is:

Number of Claims	Probability
0	0.10
1	$0.90 - q$
2	$q$

- (iii) The prior density is:

$$\pi(q) = \frac{q^2}{0.039}, \quad 0.2 < q < 0.5$$

A randomly selected policyholder had two claims in Year 1 and two claims in Year 2. For this insured, calculate the Bayesian estimate of the expected number of claims in Year 3.

- (A) Less than 1.30
- (B) At least 1.30, but less than 1.40
- (C) At least 1.40, but less than 1.50
- (D) At least 1.50, but less than 1.60
- (E) At least 1.60

**243.** For 500 claims, you are given the following distribution:

Claim Size	Number of Claims
[0, 500)	200
[500, 1,000)	110
[1,000, 2,000)	$x$
[2,000, 5,000)	$y$
[5,000, 10,000)	?
[10,000, 25,000)	?
[25,000, $\infty$ )	?

You are also given the following values taken from the ogive:

$$F_{500}(1500) = 0.689, F_{500}(3500) = 0.839$$

Calculate  $y$ .

- (A) Less than 65
- (B) At least 65, but less than 70
- (C) At least 70, but less than 75
- (D) At least 75, but less than 80
- (E) At least 80

**244.** Which of statements (A), (B), (C), and (D) is false?

- (A) The chi-square goodness-of-fit test works best when the expected number of observations varies widely from interval to interval.
- (B) For the Kolmogorov-Smirnov test, when the parameters of the distribution in the null hypothesis are estimated from the data, the probability of rejecting the null hypothesis decreases.
- (C) For the Kolmogorov-Smirnov test, the critical value for right censored data should be smaller than the critical value for uncensored data.
- (D) (Removed as this statement referred to the Anderson-Darling test).
- (E) None of (A), (B), or (C) is false.



**245.** You are given:

- (i) The number of claims follows a Poisson distribution.
- (ii) Claim sizes follow a gamma distribution with parameters  $\alpha$  (unknown) and  $\theta = 10,000$ .
- (iii) The number of claims and claim sizes are independent.
- (iv) The full credibility standard has been selected so that actual aggregate losses will be within 10% of expected aggregate losses 95% of the time.

Using limited fluctuation (classical) credibility, calculate the expected number of claims required for full credibility.

- (A) Less than 400
- (B) At least 400, but less than 450
- (C) At least 450, but less than 500
- (D) At least 500
- (E) The value cannot be determined from the information given.

**246.** You are given:

- (i) Losses follow a Burr distribution with  $\alpha = 2$ .
- (ii) A random sample of 15 losses is:  
195 255 270 280 350 360 365 380 415 450 490 550 575 590 615
- (iii) The parameters  $\gamma$  and  $\theta$  are estimated by percentile matching using the smoothed empirical estimates of the 30th and 65th percentiles.

Calculate the estimate of  $\gamma$ .

- (A) Less than 2.9
- (B) At least 2.9, but less than 3.2
- (C) At least 3.2, but less than 3.5
- (D) At least 3.5, but less than 3.8
- (E) At least 3.8

**247.** An insurance company sells three types of policies with the following characteristics:

Type of Policy	Proportion of Total Policies	Annual Claim Frequency
I	5%	Poisson with mean 0.25
II	20%	Poisson with mean 0.50
III	75%	Poisson with mean 1.00

A randomly selected policyholder is observed to have a total of one claim for Year 1 through Year 4.

For the same policyholder, calculate the Bayesian estimate of the expected number of claims in Year 5.

- (A) Less than 0.4
- (B) At least 0.4, but less than 0.5
- (C) At least 0.5, but less than 0.6
- (D) At least 0.6, but less than 0.7
- (E) At least 0.7

**248.** DELETED

**249.** You are given:

- (i) The cumulative distribution for the annual number of losses for a policyholder is:

$n$	$F_N(n)$
0	0.125
1	0.312
2	0.500
3	0.656
4	0.773
5	0.855
$\vdots$	$\vdots$

- (ii) The loss amounts follow the Weibull distribution with  $\theta = 200$  and  $\tau = 2$ .
- (iii) There is a deductible of 150 for each claim subject to an annual maximum out-of-pocket of 500 per policy.

The inversion method is used to simulate the number of losses and loss amounts for a policyholder.

- (a) For the number of losses use the uniform (0,1) random number 0.7654.
- (b) For loss amounts use the use the uniform (0,1) random numbers:

0.2738 0.5152 0.7537 0.6481 0.3153

Use the random numbers in order and only as needed.

Based on the simulation, calculate the insurer's aggregate payments for this policyholder.

- (A) 106.93
- (B) 161.32
- (C) 224.44
- (D) 347.53
- (E) 520.05

**250.** You have observed the following three loss amounts:

186    91    66

Seven other amounts are known to be less than or equal to 60. Losses follow an inverse exponential with distribution function

$$F(x) = e^{-\theta/x}, \quad x > 0$$

Calculate the maximum likelihood estimate of the population mode.

- (A) Less than 11
- (B) At least 11, but less than 16
- (C) At least 16, but less than 21
- (D) At least 21, but less than 26
- (E) At least 26

**251.** For a group of policies, you are given:

- (i) The annual loss on an individual policy follows a gamma distribution with parameters  $\alpha = 4$  and  $\theta$ .
- (ii) The prior distribution of  $\theta$  has mean 600.
- (iii) A randomly selected policy had losses of 1400 in Year 1 and 1900 in Year 2.
- (iv) Loss data for Year 3 was misfiled and unavailable.
- (v) Based on the data in (iii), the Bühlmann credibility estimate of the loss on the selected policy in Year 4 is 1800.
- (vi) After the estimate in (v) was calculated, the data for Year 3 was located. The loss on the selected policy in Year 3 was 2763.

Calculate the Bühlmann credibility estimate of the loss on the selected policy in Year 4 based on the data for Years 1, 2 and 3.

- (A) Less than 1850
- (B) At least 1850, but less than 1950
- (C) At least 1950, but less than 2050
- (D) At least 2050, but less than 2150
- (E) At least 2150

**252.** The following is a sample of 10 payments:

4 4 5+ 5+ 5+ 8 10+ 10+ 12 15

where + indicates that a loss exceeded the policy limit.

Calculate Greenwood's approximation to the variance of the product-limit estimate  $\hat{S}(11)$ .

- (A) 0.016
- (B) 0.031
- (C) 0.048
- (D) 0.064
- (E) 0.075

**253.** You are given:

- (i) For  $Q = q$ ,  $X_1, X_2, \dots, X_m$  are independent, identically distributed Bernoulli random variables with parameter  $q$ .
- (ii)  $S_m = X_1 + X_2 + \dots + X_m$
- (iii) The prior distribution of  $Q$  is beta with  $a = 1$ ,  $b = 99$ , and  $\theta = 1$ .

Calculate the smallest value of  $m$  such that the mean of the marginal distribution of  $S_m$  is greater than or equal to 50.

- (A) 1082
- (B) 2164
- (C) 3246
- (D) 4950
- (E) 5000

**254.** You are given:

- (i) A portfolio consists of 100 identically and independently distributed risks.
- (ii) The number of claims for each risk follows a Poisson distribution with mean  $\lambda$ .
- (iii) The prior distribution of  $\lambda$  is:

$$\pi(\lambda) = \frac{(50\lambda)^4 e^{-50\lambda}}{6\lambda}, \quad \lambda > 0$$

During Year 1, the following loss experience is observed:

Number of Claims	Number of Risks
0	90
1	7
2	2
3	1
Total	100

Calculate the Bayesian expected number of claims for the portfolio in Year 2.

- (A) 8
- (B) 10
- (C) 11
- (D) 12
- (E) 14

**255.** You are planning a simulation to estimate the mean of a non-negative random variable. It is known that the population standard deviation is 20% larger than the population mean.

$M$  denotes the estimate, using the central limit theorem, of the smallest number of trials needed so that you will be at least 95% confident that the simulated mean is within 5% of the population mean.

Calculate  $M$ .

- (A) 944
- (B) 1299
- (C) 1559
- (D) 1844
- (E) 2213

**256.** You are given:

- (i) The distribution of the number of claims per policy during a one-year period for 10,000 insurance policies is:

Number of Claims per Policy	Number of Policies
0	5000
1	5000
2 or more	0

- (ii) You fit a binomial model with parameters  $m$  and  $q$  using the method of maximum likelihood.

Calculate the maximum value of the loglikelihood function when  $m = 2$ .

- (A) -10,397
- (B) -7,781
- (C) -7,750
- (D) -6,931
- (E) -6,730



**257.** You are given:

- (i) Over a three-year period, the following claim experience was observed for two insureds who own delivery vans:

Insured		Year		
		1	2	3
A	Number of Vehicles	2	2	1
	Number of Claims	1	1	0
B	Number of Vehicles	N/A	3	2
	Number of Claims	N/A	2	3

- (ii) The number of claims for each insured each year follows a Poisson distribution.

Calculate the semiparametric empirical Bayes estimate of the claim frequency per vehicle for Insured A in Year 4.

- (A) Less than 0.55  
(B) At least 0.55, but less than 0.60  
(C) At least 0.60, but less than 0.65  
(D) At least 0.65, but less than 0.70  
(E) At least 0.70

**258.** For the data set

200	300	100	400	$X$
-----	-----	-----	-----	-----

you are given:

(i)  $k = 4$

(ii)  $s_2 = 1$

(iii)  $r_4 = 1$

(iv) The Nelson-Åalen estimate  $\hat{H}(410) > 2.15$

Calculate  $X$ .

(A) 100

(B) 200

(C) 300

(D) 400

(E) 500

**259.** You are given:

- (i) A hospital liability policy has experienced the following numbers of claims over a 10-year period:

10   2   4   0   6   2   4   5   4   2

- (ii) Numbers of claims are independent from year to year.  
(iii) You use the method of maximum likelihood to fit a Poisson model.

Calculate the estimated coefficient of variation of the estimator of the Poisson parameter.

- (A) 0.10  
(B) 0.16  
(C) 0.22  
(D) 0.26  
(E) 1.00

**260.** You are given:

- (i) Claim sizes follow an exponential distribution with mean  $\theta$ .  
(ii) For 80% of the policies,  $\theta = 8$ .  
(iii) For 20% of the policies,  $\theta = 2$ .

A randomly selected policy had one claim in Year 1 of size 5.

Calculate the Bayesian expected claim size for this policy in Year 2.

- (A) Less than 5.8  
(B) At least 5.8, but less than 6.2  
(C) At least 6.2, but less than 6.6  
(D) At least 6.6, but less than 7.0  
(E) At least 7.0

**261.** DELETED

**262.** You are given:

- (i) At time 4 hours, there are 5 working light bulbs.
- (ii) The 5 bulbs are observed for  $p$  more hours.
- (iii) Three light bulbs burn out at times 5, 9, and 13 hours, while the remaining light bulbs are still working at time  $4 + p$  hours.
- (iv) The distribution of failure times is uniform on  $(0, \omega)$ .
- (v) The maximum likelihood estimate of  $\omega$  is 29.

Calculate  $p$ .

- (A) Less than 10
- (B) At least 10, but less than 12
- (C) At least 12, but less than 14
- (D) At least 14, but less than 16
- (E) At least 16

**263.** You are given:

- (i) The number of claims incurred in a month by any insured follows a Poisson distribution with mean  $\lambda$ .
- (ii) The claim frequencies of different insureds are independent.
- (iii) The prior distribution of  $\lambda$  is Weibull with  $\theta = 0.1$  and  $\tau = 2$ .
- (iv) Some values of the gamma function are

$$\Gamma(0.5) = 1.77245, \Gamma(1) = 1, \Gamma(1.5) = 0.88623, \Gamma(2) = 1$$

(v)

Month	Number of Insureds	Number of Claims
1	100	10
2	150	11
3	250	14

Calculate the Bühlmann-Straub credibility estimate of the number of claims in the next 12 months for 300 insureds.

- (A) Less than 255
- (B) At least 255, but less than 275
- (C) At least 275, but less than 295
- (D) At least 295, but less than 315
- (E) At least 315

**264.** You are given:

(i) The following data set:

2500 2500 2500 3617 3662 4517 5000 5000 6010 6932 7500 7500

(ii)  $\hat{H}_1(7000)$  is the Nelson-Åalen estimate of the cumulative hazard rate function calculated under the assumption that all of the observations in (i) are uncensored.

(iii)  $\hat{H}_2(7000)$  is the Nelson-Åalen estimate of the cumulative hazard rate function calculated under the assumption that all occurrences of the values 2500, 5000 and 7500 in (i) reflect right-censored observations and that the remaining observed values are uncensored.

Calculate  $|\hat{H}_1(7000) - \hat{H}_2(7000)|$ .

- (A) Less than 0.1
- (B) At least 0.1, but less than 0.3
- (C) At least 0.3, but less than 0.5
- (D) At least 0.5, but less than 0.7
- (E) At least 0.7

**265.** For a warranty product you are given:

- (i) Paid losses follow the lognormal distribution with  $\mu = 13.294$ ,  $\sigma = 0.494$ .
- (ii) The ratio of estimated unpaid losses to paid losses,  $y$ , is modeled by

$$y = 0.801x^{0.851}e^{-0.747x}$$

where

$x = 2006 - \text{contract purchase year}$

The inversion method is used to simulate four paid losses with the following four uniform (0,1) random numbers:

0.2877      0.1210      0.8238      0.6179

Using the simulated values, calculate the empirical estimate of the average unpaid losses for purchase year 2005.

- (A) Less than 300,000
- (B) At least 300,000, but less than 400,000
- (C) At least 400,000, but less than 500,000
- (D) At least 500,000, but less than 600,000
- (E) At least 600,000

**266.** This question has been moved to become Question 306.

**267.** You are given:

- (i) The annual number of claims for an individual risk follows a Poisson distribution with mean  $\lambda$ .
- (ii) For 75% of the risks,  $\lambda = 1$ .
- (iii) For 25% of the risks,  $\lambda = 3$ .

A randomly selected risk had  $r$  claims in Year 1. The Bayesian estimate of this risk's expected number of claims in Year 2 is 2.98.

Calculate the Bühlmann credibility estimate of the expected number of claims for this risk in Year 2.

- (A) Less than 1.9
- (B) At least 1.9, but less than 2.3
- (C) At least 2.3, but less than 2.7
- (D) At least 2.7, but less than 3.1
- (E) At least 3.1



**268.** You are given the following ages at time of death for 10 individuals:

25    30    35    35    37    39    45    47    49    55

Using a uniform kernel with bandwidth  $b = 10$ , calculate the kernel density estimate of the probability of survival to age 40.

- (A) 0.377
- (B) 0.400
- (C) 0.417
- (D) 0.439
- (E) 0.485

**269.** The random variables  $X_1, X_2, \dots, X_n$  are independent and identically distributed with probability density function

$$f(x) = \frac{e^{-x/\theta}}{\theta}, \quad x \geq 0$$

Determine  $E[\bar{X}^2]$ .

- (A)  $\frac{n+1}{n}\theta^2$
- (B)  $\frac{n+1}{n^2}\theta^2$
- (C)  $\frac{1}{n}\theta^2$
- (D)  $\frac{1}{\sqrt{n}}\theta^2$
- (E)  $\theta^2$

**270.** Three individual policyholders have the following claim amounts over four years:

Policyholder	Year 1	Year 2	Year 3	Year 4
X	2	3	3	4
Y	5	5	4	6
Z	5	5	3	3

Using the nonparametric empirical Bayes procedure, calculate the estimated variance of the hypothetical means.

- (A) Less than 0.40
- (B) At least 0.40, but less than 0.60
- (C) At least 0.60, but less than 0.80
- (D) At least 0.80, but less than 1.00
- (E) At least 1.00

**271.** DELETED

**272.** You are given:

- (i) The number of claims made by an individual in any given year has a binomial distribution with parameters  $m = 4$  and  $q$ .
- (ii) The prior distribution of  $q$  has probability density function

$$\pi(q) = 6q(1-q), \quad 0 < q < 1.$$

- (iii) Two claims are made in a given year.

Calculate the mode of the posterior distribution of  $q$ .

- (A) 0.17
- (B) 0.33
- (C) 0.50
- (D) 0.67
- (E) 0.83

**273.** A company has determined that the limited fluctuation full credibility standard is 2000 claims if:

- (i) The total number of claims is to be within 3% of the true value with probability  $p$ .
- (ii) The number of claims follows a Poisson distribution.

The standard is changed so that the total cost of claims is to be within 5% of the true value with probability  $p$ , where claim severity has probability density function:

$$f(x) = \frac{1}{10,000}, \quad 0 \leq x \leq 10,000$$

Using limited fluctuation credibility, calculate the expected number of claims necessary to obtain full credibility under the new standard.

- (A) 720
- (B) 960
- (C) 2160
- (D) 2667
- (E) 2880

**274.** For a mortality study with right censored data, you are given the following:

Time	Number of Deaths	Number at Risk
3	1	50
5	3	49
6	5	$k$
10	7	21

The Nelson-Åalen estimate of the survival function at time 10 is 0.575.

Calculate  $k$ .

- (A) 28
- (B) 31
- (C) 36
- (D) 44
- (E) 46

**275.** A dental benefit is designed so that a deductible of 100 is applied to annual dental charges. The reimbursement to the insured is 80% of the remaining dental charges subject to an annual maximum reimbursement of 1000.

You are given:

- (i) The annual dental charges for each insured are exponentially distributed with mean 1000.
- (ii) Use the following uniform (0, 1) random numbers and the inversion method to generate four values of annual dental charges:

0.30   0.92   0.70   0.08

Calculate the average annual reimbursement for this simulation.

- (A) 522
- (B) 696
- (C) 757
- (D) 947
- (E) 1042

**276.** For a group of policies, you are given:

- (i) Losses follow the distribution function

$$F(x) = 1 - \theta/x, \quad x > 0.$$

- (ii) A sample of 20 losses resulted in the following:

Interval	Number of Losses
(0,10]	9
(10, 25]	6
(25, $\infty$ )	5

Calculate the maximum likelihood estimate of  $\theta$ .

- (A) 5.00  
(B) 5.50  
(C) 5.75  
(D) 6.00  
(E) 6.25

**277.** You are given:

- (i) Loss payments for a group health policy follow an exponential distribution with unknown mean.
- (ii) A sample of losses is:

100    200    400    800    1400    3100

Using the delta method, calculate the approximation of the variance of the maximum likelihood estimator of  $S(1500)$ .

- (A) 0.019
- (B) 0.025
- (C) 0.032
- (D) 0.039
- (E) 0.045

**278.** You are given:

- (i) A random sample of payments from a portfolio of policies resulted in the following:

Interval	Number of Policies
(0, 50]	36
(50, 150]	$x$
(150, 250]	$y$
(250, 500]	84
(500, 1000]	80
(1000, $\infty$ )	0
Total	$n$

- (ii) Two values of the ogive constructed from the data in (i) are:

$$F_n(90) = 0.21, F_n(210) = 0.51$$

Calculate  $x$ .

- (A) 120  
(B) 145  
(C) 170  
(D) 195  
(E) 220

**279.** Loss amounts have the distribution function

$$F(x) = \begin{cases} (x/100)^2, & 0 \leq x \leq 100 \\ 1, & x > 100 \end{cases}$$

An insurance pays 80% of the amount of the loss in excess of an ordinary deductible of 20, subject to a maximum payment of 60 per loss.

Calculate the conditional expected claim payment, given that a payment has been made.

- (A) 37
- (B) 39
- (C) 43
- (D) 47
- (E) 49

**280.** A compound Poisson claim distribution has  $\lambda = 5$  and individual claim amounts distributed as follows:

$$\frac{x}{5} \quad \frac{f_X(x)}{0.6} \\ k \quad 0.4 \quad \text{Where } k > 5$$

The expected cost of an aggregate stop-loss insurance subject to a deductible of 5 is 28.03.

Calculate  $k$ .

- (A) 6
- (B) 7
- (C) 8
- (D) 9
- (E) 10



**281.** DELETED

**282.** Aggregate losses are modeled as follows:

- (i) The number of losses has a Poisson distribution with  $\lambda = 3$ .
- (ii) The amount of each loss has a Burr distribution with  $\alpha = 3, \theta = 2, \gamma = 1$ .
- (iii) The number of losses and the amounts of the losses are mutually independent.

Calculate the variance of aggregate losses.

- (A) 12
- (B) 14
- (C) 16
- (D) 18
- (E) 20

**283.** The annual number of doctor visits for each individual in a family of 4 has a geometric distribution with mean 1.5. The annual numbers of visits for the family members are mutually independent. An insurance pays 100 per doctor visit beginning with the 4th visit per family.

Calculate the expected payments per year for this family.

- (A) 320
- (B) 323
- (C) 326
- (D) 329
- (E) 332

**284.** A risk has a loss amount that has a Poisson distribution with mean 3.

An insurance covers the risk with an ordinary deductible of 2. An alternative insurance replaces the deductible with coinsurance  $\alpha$ , which is the proportion of the loss paid by the insurance, so that the expected insurance cost remains the same.

Calculate  $\alpha$ .

- (A) 0.22
- (B) 0.27
- (C) 0.32
- (D) 0.37
- (E) 0.42

**285.** You are the producer for the television show Actuarial Idol. Each year, 1000 actuarial clubs audition for the show. The probability of a club being accepted is 0.20.

The number of members of an accepted club has a distribution with mean 20 and variance 20. Club acceptances and the numbers of club members are mutually independent.

Your annual budget for persons appearing on the show equals 10 times the expected number of persons plus 10 times the standard deviation of the number of persons.

Calculate your annual budget for persons appearing on the show.

- (A) 42,600
- (B) 44,200
- (C) 45,800
- (D) 47,400
- (E) 49,000

**286.** Michael is a professional stuntman who performs dangerous motorcycle jumps at extreme sports events around the world.

The annual cost of repairs to his motorcycle is modeled by a two parameter Pareto distribution with  $\theta = 5000$  and  $\alpha = 2$ .

An insurance reimburses Michael's motorcycle repair costs subject to the following provisions:

- (i) Michael pays an annual ordinary deductible of 1000 each year.
- (ii) Michael pays 20% of repair costs between 1000 and 6000 each year.
- (iii) Michael pays 100% of the annual repair costs above 6000 until Michael has paid 10,000 in out-of-pocket repair costs each year.
- (iv) Michael pays 10% of the remaining repair costs each year.

Calculate the expected annual insurance reimbursement.

- (A) 2300
- (B) 2500
- (C) 2700
- (D) 2900
- (E) 3100

**287.** For an aggregate loss distribution  $S$ :

- (i) The number of claims has a negative binomial distribution with  $r = 16$  and  $\beta = 6$ .
- (ii) The claim amounts are uniformly distributed on the interval  $(0, 8)$ .
- (iii) The number of claims and claim amounts are mutually independent.

Using the normal approximation for aggregate losses, calculate the premium such that the probability that aggregate losses will exceed the premium is 5%.

- (A) 500
- (B) 520
- (C) 540
- (D) 560
- (E) 580

**288.** The random variable  $N$  has a mixed distribution:

- (i) With probability  $p$ ,  $N$  has a binomial distribution with  $q = 0.5$  and  $m = 2$ .
- (ii) With probability  $1 - p$ ,  $N$  has a binomial distribution with  $q = 0.5$  and  $m = 4$ .

Which of the following is a correct expression for  $\Pr(N = 2)$ ?

- (A)  $0.125p^2$
- (B)  $0.375 + 0.125p$
- (C)  $0.375 + 0.125p^2$
- (D)  $0.375 - 0.125p^2$
- (E)  $0.375 - 0.125p$

**289.** A compound Poisson distribution has  $\lambda = 5$  and claim amount distribution as follows:

$x$	$p(x)$
100	0.80
500	0.16
1000	0.04

Calculate the probability that aggregate claims will be exactly 600.

- (A) 0.022
- (B) 0.038
- (C) 0.049
- (D) 0.060
- (E) 0.070

**290.** A random variable  $X$  has a two-point mixture distribution with pdf

$$f(x) = \frac{1}{8}e^{-x/2} + \frac{1}{4}e^{-x/3}, \quad x \geq 0.$$

You are to simulate one value,  $x$ , from this distribution using uniform random numbers 0.2 and 0.6. Use the value 0.2 and the inversion method to simulate  $J$  where  $J = 1$  refers to the first random variable in the mixture and  $J = 2$  refers to the second random variable. Then use 0.6 and the inversion method to simulate a value from  $X$ .

Calculate the value of  $x$ .

- (A) 0.45
- (B) 1.02
- (C) 1.53
- (D) 1.83
- (E) 2.75

**291.** There are four decrements, labeled (1), (2), (3), and (4). Over the next year the probabilities for each are 0.05, 0.10, 0.15, and 0.20, respectively. There are 500 independent lives subject to these decrements. You plan to simulate the results for the next year using successive binomial distributions and do so in the order in which the decrements are numbered. The first binomial simulation had 23 instances of decrement (1) and the second binomial simulation had 59 instances of decrement (2).

Calculate the values of  $m$  and  $q$  for the binomial distribution to be used for simulating decrement (3).

- (A)  $m = 500, q = 0.15$
- (B)  $m = 500, q = 0.21$
- (C)  $m = 418, q = 0.15$
- (D)  $m = 418, q = 0.18$
- (E)  $m = 418, q = 0.21$

**292** Four of XYZ's policyholders have the following history.

Policy number	Date of birth	Date policy issued	Status on 12-31-2012	Status on policy anniversary in 2013
1	4-1-1930	3-1-1980	Died 10-1-2012	Died 10-1-2012
2	7-1-1930	10-1-1990	Insured	Surrendered 5-1-2013
3	8-1-1930	1-1-2000	Insured	Insured
4	9-1-1930	8-1-2000	Surrendered 11-1-2012	Surrendered 11-1-2012

XYZ conducts a mortality study from 1-1-2012 through 12-31-2012 using actual ages.

Calculate the absolute value of the difference between the estimated mortality probabilities at age 82, using the exact and actuarial methods.

- (A) 0.012
- (B) 0.015
- (C) 0.018
- (D) 0.021
- (E) 0.024

**293** Four of XYZ's policyholders have the following history.

Policy number	Date of birth	Date policy issued	Status on 12-31-2012	Status on policy anniversary in 2013
1	4-1-1930	3-1-1980	Died 10-1-2012	Died 10-1-2012
2	7-1-1930	10-1-1990	Insured	Surrendered 5-1-2013
3	8-1-1930	1-1-2000	Insured	Insured
4	9-1-1930	8-1-2000	Surrendered 11-1-2012	Surrendered 11-1-2012

XYZ conducts a mortality study from 1-1-2012 through 12-31-2012 using insuring ages.

XYZ assigns insuring ages based on the age at the nearest birthday when the policy is issued.

Calculate the absolute value of the difference between the estimated mortality probabilities at age 82, using the exact and actuarial methods.

- (A) 0.046
- (B) 0.051
- (C) 0.055
- (D) 0.060
- (E) 0.064

**294** Four of XYZ's policyholders have the following history.

Policy number	Date of birth	Date policy issued	Status on 12-31-2012	Status on policy anniversary in 2013
1	4-1-1930	3-1-1980	Died 10-1-2012	Died 10-1-2012
2	7-1-1930	10-1-1990	Insured	Surrendered 5-1-2013
3	8-1-1930	1-1-2000	Insured	Insured
4	9-1-1930	8-1-2000	Surrendered 11-1-2012	Surrendered 11-1-2012

XYZ conducts a mortality study from anniversaries in 2012 through anniversaries in 2013 using insuring ages.

XYZ assigns insuring ages based on the age at the nearest birthday when the policy is issued.

Calculate the absolute value of the difference between the estimated mortality probabilities at age 82, using the exact and actuarial methods.

- (A) 0.031
- (B) 0.035
- (C) 0.039
- (D) 0.042
- (E) 0.045



**295** Four of XYZ's policyholders have the following history.

Policy number	Date of birth	Date policy issued	Status on 12-31-2012	Status on policy anniversary in 2013
1	4-1-1930	3-1-1980	Died 10-1-2012	Died 10-1-2012
2	7-1-1930	10-1-1990	Insured	Surrendered 5-1-2013
3	8-1-1930	1-1-2000	Insured	Insured
4	9-1-1930	8-1-2000	Surrendered 11-1-2012	Surrendered 11-1-2012

XYZ conducts a mortality study from 1-1-2012 through 12-31-2012 using insuring ages.

XYZ assigns insuring ages based on the age at the nearest birthday when the policy is issued.

The exact exposure method is used to estimate  $q_{82}$ , the probability that a life aged 82 dies before age 83.

Calculate the variance of this estimator, using the delta method approach.

- (A) 0.13
- (B) 0.26
- (C) 0.41
- (D) 0.56
- (E) 0.71

**296.** A mortality study of insured lives is being conducted. Insuring ages are employed and the study runs from anniversaries in 2010 through anniversaries in 2012. Assume that events that can occur between anniversaries do so uniformly. The following was observed:

There are 10,000 lives at age 60 when first observed in 2010. Between then and their next anniversary 100 die and 800 surrender their policy. In 2011, 1000 new policies are sold at age 61. For those insured at their age 61 anniversary in 2011, 120 die and 700 surrender before their 2012 anniversary.

There are 8000 lives at age 61 when first observed in 2010. Between then and their next anniversary 80 die and 700 surrender their policy. In 2011, 800 new policies are sold at age 62. For those insured at their age 62 anniversary in 2011, 90 die and 600 surrender before their 2012 anniversary.

Calculate the actuarial estimate of the mortality probability at age 61.

- (A) 0.0112
- (B) 0.0113
- (C) 0.0114
- (D) 0.0115
- (E) 0.0116

**297.** A mortality study of insured lives is being conducted. Insuring ages are employed and the study runs from anniversaries in 2010 through anniversaries in 2012. Assume that events that can occur between anniversaries do so uniformly. The following was observed:

There are 10,000 lives at age 60 when first observed in 2010. Between then and their next anniversary 100 die and 800 surrender their policy. In 2011, 1000 new policies are sold at age 61. For those insured at their age 61 anniversary in 2011, 120 die and 700 surrender before their 2012 anniversary.

There are 8000 lives at age 61 when first observed in 2010. Between then and their next anniversary 80 die and 700 surrender their policy. In 2011, 800 new policies are sold at age 62. For those insured at their age 62 anniversary in 2011, 90 die and 600 surrender before their 2012 anniversary.

Using the exact exposure method, calculate the estimate of the mortality probability at age 61.

- (A) 0.0112
- (B) 0.0113
- (C) 0.0114
- (D) 0.0115
- (E) 0.0116

- 298.** For a warranty policy, the expenses,  $E$ , are the product of the random variable  $Y$  and the loss amount,  $X$ . That is,  $E = XY$ . Loss amounts,  $X$ , follow the lognormal distribution with the underlying normal distribution parameters  $\mu = 5.2$  and  $\sigma = 1.4$ . Given  $X$ , the conditional probability density function of  $Y$  is:

$$f(y|x) = \frac{\sqrt{x}}{2} e^{-y\sqrt{x}/2}, \quad x, y > 0$$

Use the inversion method and the following three uniform (0, 1) random numbers to simulate three loss amounts:

0.937            0.512            0.281

For each simulated loss amount, use the following uniform (0, 1) random numbers, in order, to simulate three expense amounts.

0.433            0.298            0.978

Calculate the average value of expenses based on the three simulated amounts.

- (A) Less than 23
- (B) At least 23, but less than 28
- (C) At least 28, but less than 33
- (D) At least 33, but less than 38
- (E) At least 38

- 299.** For a health insurance policy effective January 1, the number of claims in a one-year period follows the Poisson distribution with mean  $\lambda = 5$ .

The following uniform (0, 1) random numbers are used in the given order to simulate the time of the first claim and the times between occurrences of subsequent claims.

0.605            0.529            0.782

Calculate the simulated date of occurrence of the third claim.

- (A) Before May 1
  - (B) On or after May 1, but before August 15
  - (C) On or after August 15, but before September 1
  - (D) On or after September 1, but before September 30
  - (E) On or after September 30
- 300.** You are given:
- (i) Three observations: 2    5    8
  - (ii) The selected kernel, which does not have the same mean as the empirical estimate, has distribution function

$$K_y(x) = \begin{cases} 0, & x < y - 1 \\ \frac{x - y + 1}{3}, & y - 1 \leq x \leq y + 2 \\ 1, & x > y + 2 \end{cases}$$

Calculate the coefficient of variation of the kernel density estimator.

- (A) 0.47
- (B) 0.50
- (C) 0.52
- (D) 0.57
- (E) 0.58

**301.** For a mortality study, you are given:

(i) The following table of observations:

Interval $j$	Left End $c_j$	Right End $c_{j+1}$	New Entrants $n_j$	Withdrawals $w_j$	Deaths $d_j$
0	0	6	90	30	10
1	6	12	80	20	8
2	12	18	70	30	20
3	18	24	40	30	16

(ii)  $n_j$  = new entrants in the interval  $[c_j, c_{j+1})$ , of which 70% arrive in the first half

(iii)  $w_j$  = withdrawals in the interval  $(c_j, c_{j+1}]$ , of which 30% occur in first half

(iv)  $d_j$  = deaths in the interval  $(c_j, c_{j+1}]$ , all occurring at the mid-point

Calculate the Kaplan-Meier estimate of the probability that a subject observed at time 0 dies before time 24.

- (A) 0.41
- (B) 0.43
- (C) 0.50
- (D) 0.57
- (E) 0.59

**302.** For a health insurance policy, you are given:

- (i) The annual number of claims follows the distribution given below

Number of Claims	Probability
0	0.7
1	0.2
2	0.1

- (ii) Unmodified claim amounts, with no deductible or limit, follow the exponential distribution with mean 20.
- (iii) Each claim is subject to a deductible of 2 and a limit of 40 applied before the deductible. There is also an aggregate annual limit of 50 applied after the deductible

Use the uniform (0, 1) random number 0.237 and the inversion method to simulate the payment when the number of claims is one. Use the uniform (0, 1) random numbers 0.661 and 0.967 and the inversion method to simulate the payments when the number of claims is two.

Calculate the mean of annual payments, using the simulated values.

- (A) Less than 6
- (B) At least 6, but less than 21
- (C) At least 21, but less than 36
- (D) At least 36, but less than 51
- (E) At least 51

**303.** An actuary observed a sample of 1000 policyholders during the interval from age 30 to age 31 and found that 98 of them died in this age interval.

Based on the assumption of a constant hazard rate in this age interval, the actuary obtained a maximum likelihood estimate of 0.100 for the conditional probability that a policyholder alive at age 30 dies before age 31.

Calculate the estimate of the variance of this maximum likelihood estimator, using the delta method.

- (A) 0.000079
- (B) 0.000083
- (C) 0.000086
- (D) 0.000092
- (E) 0.000097



**304.** For a product liability policy, you are given:

(i) Loss amounts,  $Y$ , follow the discrete mixture distribution denoted by

$$F_Y(y) = \sum_{k=1}^4 \alpha_k F_{X_k}(y), \quad \text{where } \alpha_k = k\alpha_1, \quad k = 2, 3, 4$$

(ii) The random variables  $X_k$  follow the exponential distribution with mean

$$\theta_k = \frac{1}{\alpha_k}.$$

Three loss amounts are to be simulated using the following uniform (0, 1) random numbers in order:

- a) For the required discrete random variable  $J$ , where  $\Pr(J = k) = \alpha_k$
- |       |       |       |
|-------|-------|-------|
| 0.235 | 0.456 | 0.719 |
|-------|-------|-------|
- b) For the exponential distributions
- |       |       |       |
|-------|-------|-------|
| 0.435 | 0.298 | 0.678 |
|-------|-------|-------|

Calculate the average of the three simulated loss amounts.

- (A) Less than 0.5
- (B) At least 0.5, but less than 1.0
- (C) At least 1.0, but less than 1.5
- (D) At least 1.5, but less than 2.0
- (E) At least 2.0

- 305.** An insurance policy is available with deductibles of 500 or 750, and policy limits of 1500 or 20,000. The underlying loss distribution is assumed to be independent of deductible and policy limit.

You are given the following claim counts:

Loss Range	Deductible		Total
	500	750	
500-750	8		8
750-1000	10	10	20
1000-1500	12	15	27
1500-5000	14	18	32
5000-10,000	10	17	27
10,000-20,000	0	0	0
At 1500 limit	6	0	6
At 20,000 limit	0	0	0
Total	60	60	120

Calculate the probability that a loss from a policy with a 750 deductible will exceed 5000, using the Kaplan-Meier approximation with all the given data.

- (A) 0.27
- (B) 0.29
- (C) 0.33
- (D) 0.36
- (E) 0.37

Use the following information for Questions 306 and 307.

Five models are fitted to a sample of  $n = 260$  observations with the following results:

Model	Number of Parameters	Loglikelihood
I	1	-414
II	2	-412
III	3	-411
IV	4	-409
V	6	-409

**306.** (This question was formerly Question 266.) Determine the model favored by the Schwarz Bayesian criterion.

- (A) I
- (B) II
- (C) III
- (D) IV
- (E) V

**307.** (This question is effective with the October 2016 syllabus.) Determine the model favored by the Akaike Information criterion.

- (A) I
- (B) II
- (C) III
- (D) IV
- (E) V